

PRE UPPER PRIMARY SCHOLARSHIP EXAMINATION (Std. 5th), FEBRUARY 2019

Seat No.

0 2 0 2

Set

A

Paper No. II

Medium : Urdu

Time : 3:30pm to 5:00pm

Pages : 32

Third Language and Intelligence Test

Total Marks : 150

Read the following instructions carefully before you answer the questions.

- (1) This question paper contains two sections. In Section I there are 1 to 25 questions of Third Language and in Section II there are 26 to 75 questions of Intelligence Test. All 75 questions are compulsory.
- (2) All questions carry 2 marks each.
- (3) Time limit to solve the question paper is 90 minutes.
- (4) Separate answer sheet is given to record the answers. Each question has been given four alternatives. Read them carefully. Select the correct answer and shade the correct answer in the answer sheet.
Example :- If the correct alternative for Q. No. 6 is 2, then record you answer as follows :
Question No. 6 ① ② ③ ④
- (5) Answer recorded in any other form will not be considered. Such answer will be credited with 'Zero' mark.
Example : ① ② ③ ④
- (6) Use blue or black ball pen to darken the circle. Pencil is not allowed. Circles darkened by pencil will not be credited.
- (7) **One you have darkened the circle as correct alternative you cannot change it.**
- (8) **If more than one circles are darkened or overwriting is done, the answer will not be accepted.**
- (9) The rough work is to be done in the space given **under each page** or on the **last page** of the question paper.
- (10) If you do not know the answer to any question, do not spend much time on it and pass on to the next one. If the time permits you can come back to the question which you have left in the first instance and try them again.
- (11) If you find any question incomplete or with error, then do not ask anything to the Supervisor or Centre Incharge.
- (12) For any error/mistake/objection issues, school or parents should not send written application to Block Education Officer or Education Officer. These error/mistake/objection issues should be register online through respective school login only.
- (13) The error/mistake/objection issues should be register online within 10-days from the publication of Interim answer key on MSCE website.
- (14) Questions can be cancelled due to printing mistake of any other reason, on the basis of the suggestions given by the Committee of Experts.
- (15) Along with the question paper of the respective medium, the English version of question paper is also provided. In case of doubt please refer to the English version of the same question.

Section I

3rd Language

Q. 1 to Q. 3 Read the passage carefully and answer the following questions.

Poseidon was the Greek god of the sea. He carried trident which was the symbol of his power. He split mountains with his trident and rolled the broken parts into the sea. He had a glittering palace in the depths of the Aegeon Sea.

1. Who was the Greek god of the sea ?

- (1) Poseidon (2) Greek
(3) Aegeon (4) Power

2. What did Poseidon carry ?

- (1) palace (2) trident
(3) depth (4) sea

3. The trident was the symbol of _____ .

- (1) idea (2) depth
(3) money (4) power

4. Choose the correct punctuation mark which is not present in the given box.

,	?
!	.

(1) ?

(2) !

(3) ;

(4) .

Space for Rough Work

5. Complete the word register.

drum, cymbals, flute, _____

- (1) sieve
- (2) stain
- (3) tambourine
- (4) grater

6. Look at the greeting card. Read the message. Choose the proper date.

“Dear Teacher
We love you
So much !”
.....Your students.

- (1) On 5th September
- (2) On 15th August
- (3) On 2nd October
- (4) On 14th November

7. Find out the odd term.

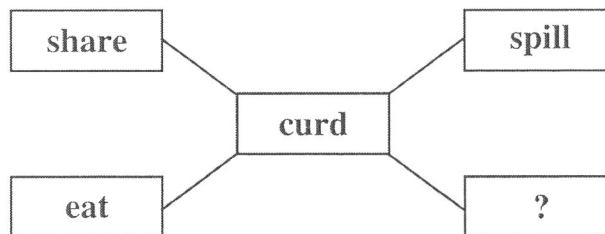
- (1) Cucumber
- (2) Fenugreek
- (3) Spinach
- (4) Coriander

8. Select the correct option.

The arrow  shows _____ direction.

- (1) right
- (2) upward
- (3) left
- (4) downwards

9. Select the proper action word.



- (1) wash
- (2) cut
- (3) peel
- (4) churn

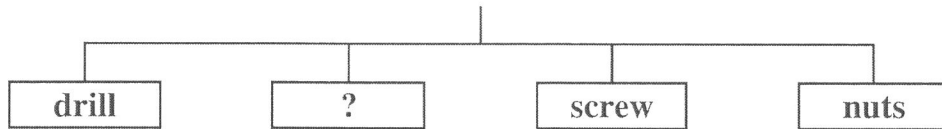
Space for Rough Work

10. She eats breakfast _____ her parents.

- (1) off (2) by
(3) with (4) at

11. Choose the correct alternative.

Tools used by Mechanic.



- (1) roast (2) space
(3) cylinder (4) spanner

12. Select the correct answer.

How many letters should be capital in the given sentence.

i live in aurangabad.

- (1) 3 (2) 1
(3) 0 (4) 2

13. Solve the riddle.

I use a stethoscope and examine patients.

Who am I?

- (1) a mechanic (2) a potter
(3) a cobbler (4) a doctor

Space for Rough Work

14. Choose the correct punctuation mark for the given sentence.

What a great surprise.

- (1) Apostrophe
- (2) Exclamation mark
- (3) Comma
- (4) Full Stop

15. Complete the motto.

_____ are our friends.

- (1) Library
- (2) Books
- (3) Teacher
- (4) School

16. Arrange the numbers properly and make a meaningful word.

o	r	e	j	u	n	y
1	2	3	4	5	6	7

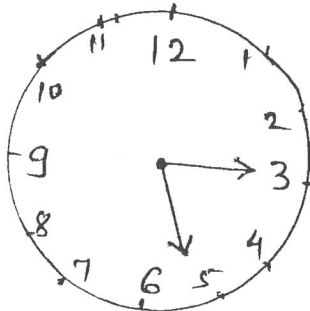
- (1) 1452673
- (2) 4172635
- (3) 4152637
- (4) 1542637

17. Choose correct alternative to seek a permission.

- (1) I will open the window
- (2) Open the window
- (3) Please open the window
- (4) May I open the window ?

18. Choose the correct option.

What time is it ?



- (1) Quarter past three
- (2) Quarter past five
- (3) Five past three
- (4) Three past five

Space for Rough Work

19. Select the correct alternative

Let's make a _____ for shopping.


- (1) list (2) least
(3) lest (4) leest

20. Fill in the blank by using the correct article.

_____ Eiffel Tower is in Paris.

- (1) A (2) The
(3) An (4) No article

21. Look at the given picture. Choose the correct conversation.



- (1) A : The bubbles look so lovely !
B : Let's buy two.
- (2) A : Here are your potatoes. Would you like to buy tomatoes ?
B : Sure.
- (3) A : Please give us two full glasses.
B : Mamma, I want some ice in my juice.
- (4) A : Do you like roasted corn cobs ?
B : Oh, I love them with salt.

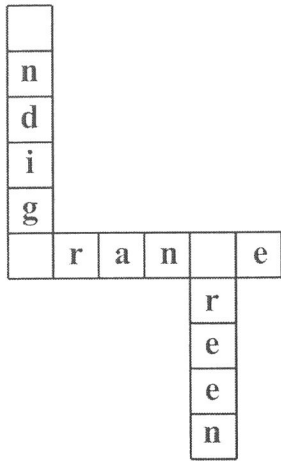
Space for Rough Work

22. Select the correct option.

My number is 12. So I am _____ in the row.

- (1) twelfth
- (2) twelfth
- (3) twelve
- (4) tweth

23. Complete the puzzle.



- (1) b, l, m
- (2) k, g, i
- (3) i, o, g
- (4) v, p, i

24. Choose the word that comes alphabetically first

- (1) Tuesday
- (2) Friday
- (3) Sunday
- (4) Monday

25. Choose the incorrect pair.

- (1) a tiny star
- (2) a rich man
- (3) a rainy day
- (4) a sharp day

Space for Rough Work

سیکشن I

متحسس

26. امر، مال، شرم، مکر، ابد، ان الفاظوں کے درمیانی حرف سے تیار ہونے والا ایک بامعنی لفظ بنائیے اور اس بامعنی لفظ کے درمیان میں آنے والا حرف مندرجہ ذیل متبادلات میں تلاش کیجئے ؟

(1) ر (2) ا (3) م (4) ک


27 سے 31 کے لئے ہدایت :- گروہ میں شامل نہ ہونے والے متبادل پہچانئے۔

27. (1) معدہ (2) غذا کی نالی


(3) چھوٹی آنت (4) پھیپھڑا

28. (1) گنگاپور۔ راجستھان (2) پائٹے۔ مہاراشٹر

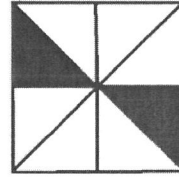
(3) بھیم بیٹکا۔ مدھیہ پردیش (4) لانج۔ گجرات



(1)



(2)

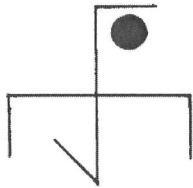


(3)

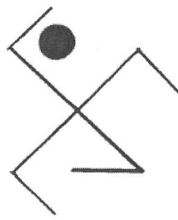


(4)

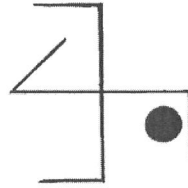
29.



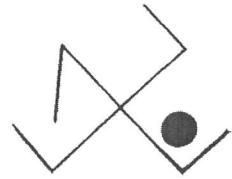
(1)



(2)



(3)



(4)

30.

115 (4)

102 (3)

136 (2)

153 (1)

31.

Space for Rough Work

Section II

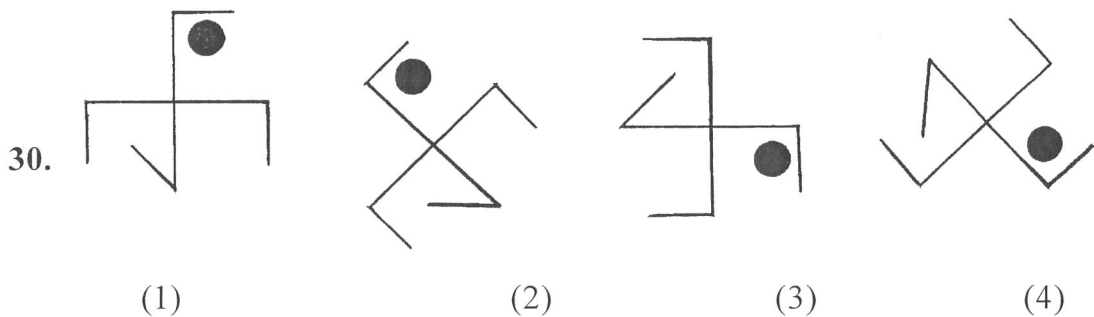
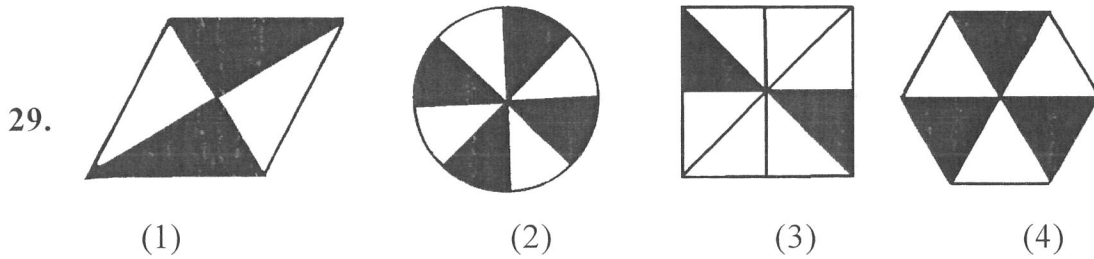
Intelligence Test

26. Make a meaningful word taking the second letter of the given words. 'PLAY, IVY, HENCE, SCORE, PEAR, FROG' From that meaningful word which letter will be at the 3rd place from right ?

- (1) E (2) V (3) L (4) R

Q27 to Q31 Direction: Find the odd term

27. (1) Stomach (2) Food Pipe
 (3) Small intestine (4) Lungs
28. (1) Rajasthan: Gangapur (2) Maharastra: Patane
 (3) Madhya Pradesh: Bhimbetka (4) Gujarat: Langhnaj



31. (1) 153 (2) 136 (3) 102 (4) 115

Space for Rough Work

حروف : ABCDE FGHIJ KLMNO PQRST UVWXYZ

32. درج ذیل عددی سلسلہ میں سوالیہ نشان کے جگہ کون سا عدد ہوگا (?)

? 13, 17, 25, 32, 37

46 (4) 45 (3) 42 (2) 47 (1)

33. معبد، مناظر، چتار، عترہ قلمرو، الوان، پر خور، نادان، عقل، لا وارث، جماعت، بے اثر۔ ان لفظوں میں 4 حروفی لفظوں کی تعداد 5 حروفی لفظوں

کی تعداد سے کتنی کم یا زیادہ ہے ؟

(1) 2 سے کم (2) 1 سے کم (3) 2 سے زیادہ (4) 3 سے کم

34. مچھڑے کو بلونگا کہا جائے، بلونگے کو پاٹھا کہا جائے، پاٹھے کو مینا کہا جائے، مینے کو پڑوا کہا جائے تو تلی کے بچے کو کیا کہا جائے گا ؟

(1) بلونگا (2) مینا (3) پاٹھا (4) پڑوا

35 سے 39 کے لئے ہدایت :- سوال کے شروعات میں تین الفاظ دیئے گئے ہیں ان کی کچھ خصوصیات ہیں جن کی وجہ سے ان کا ایک گروہ تیار ہوتا ہے اس گروہ میں آنے والا لفظ مندرجہ ذیل متبادلات سے تلاش کیجئے۔

35. جلن، کھانسی، سردی، دانے

(1) سردی والا بخار (2) ہیضہ (3) خسرہ (4) پچش

36. بہت زیادہ ”کثیر“ زیادہ

(1) کچکپانا (2) بھیڑ (3) جلوس (4) میل

37.

HH, AV, EE

TT, CJ, LG, MM

(1)

(2)

(3)

(4)

Space for Rough Work

32. Find the number which will replace the question mark (?) in the given number series.

13, 17, 25, 32, 37, ?

- (1) 47 (2) 42 (3) 45 (4) 46

33. 'Give me the strength lightly to bear my joys and sorrows.' In the statement how many times vowels have occurred ?

- (1) 13 times (2) 8 times (3) 7 times (4) 16 times

34. If calf is called cub, cub is called lamb, lamb is called kitten, kitten is called kid, kid is called puppy then what is the young ones of sheep called ?

- (1) kid (2) cule (3) kitten (4) pup


Q35 to Q39 Direction: In each of the following question three words are given with some common characteristics so their group is formed. Select a word from the options given, which has the same common feature of the given group.

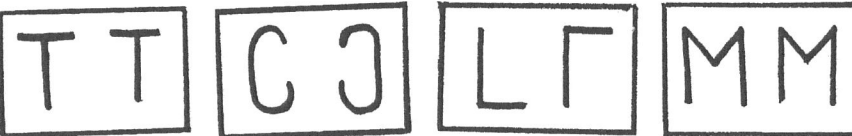
35. Itching, Cough & Cold, Corn, _____

- (1) cold fever (2) cholera (3) measles (4) dysentery

36. Choir, heap, pile, _____

- (1) humming (2) crowd (3) march (4) mile

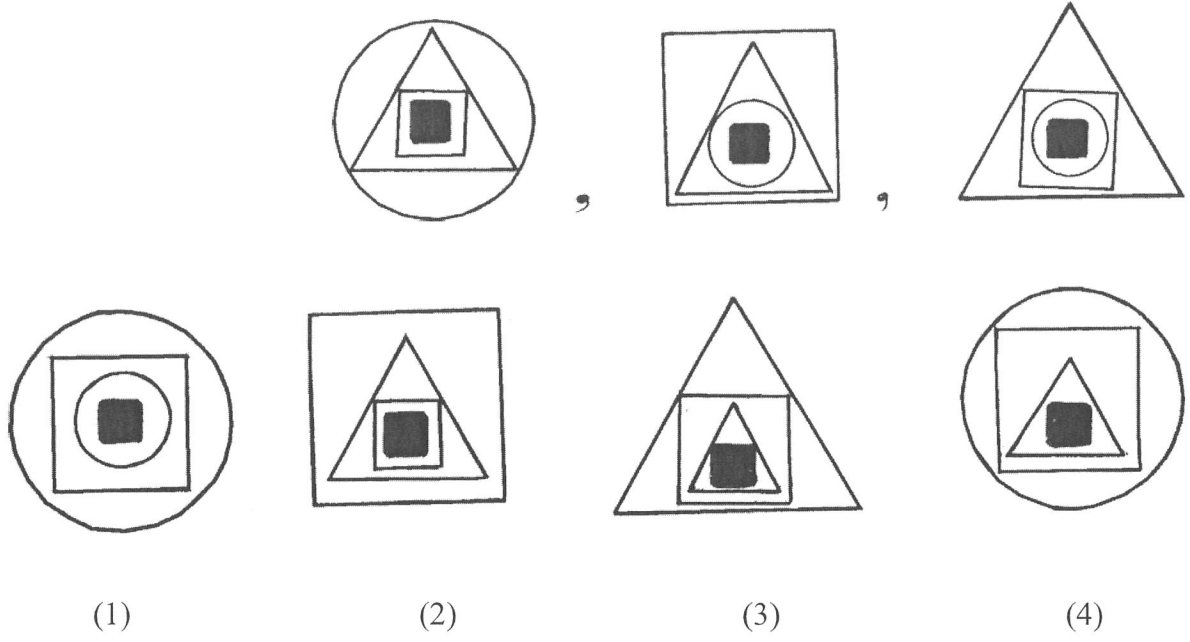
37. 



- (1) (2) (3) (4)

Space for Rough Work

حروف : ABCDE FGHIJ KLMNO PQRST UVWXYZ



39. $2\frac{1}{4}$, $4\frac{2}{8}$, $3\frac{1}{4}$ _____

$5\frac{1}{2}$ (2)

$5\frac{4}{16}$ (1)

$7\frac{1}{8}$ (4)

$6\frac{2}{4}$ (3)

40. ایک قطار میں الفیہ کا شروع سے 28 واں اور آخر سے 32 واں نمبر ہے۔ اسی قطار میں درمیان میں رہنے والی محوش کے پیچھے عائشہ کھڑی ہے۔ محوش اور عائشہ کے درمیان میں 10 لڑکیاں ہیں تو اس قطار میں عائشہ کا پیچھے سے کون سا نمبر ہوگا ؟

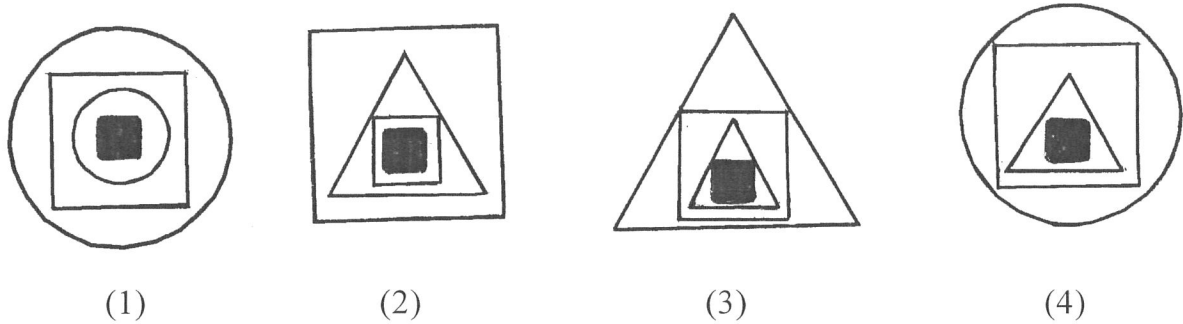
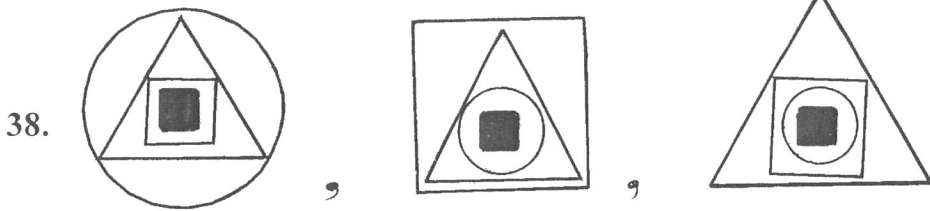
18 واں (2)

20 واں (1)

19 واں (4)

40 واں (3)

Space for Rough Work



39 $2\frac{1}{4}, 4\frac{2}{8}, 3\frac{1}{4}$ _____

(1) $5\frac{4}{16}$

(2) $5\frac{1}{2}$

(3) $6\frac{2}{4}$

(4) $7\frac{1}{8}$

40. In a queue Kavita's position is 28th from the start and 32rd from the last. In the same queue Manisha is standing behind Suvarna who is standing in the middle position of the row. In between Suvarna and Manisha there are 10 girls then what will be the order of Manisha from the last ?

(1) 20th

(2) 18th

(3) 40th

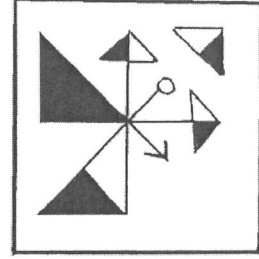
(4) 19th

Space for Rough Work

حروف : ABCDE FGHIJ KLMNO PQRST UVWXYZ

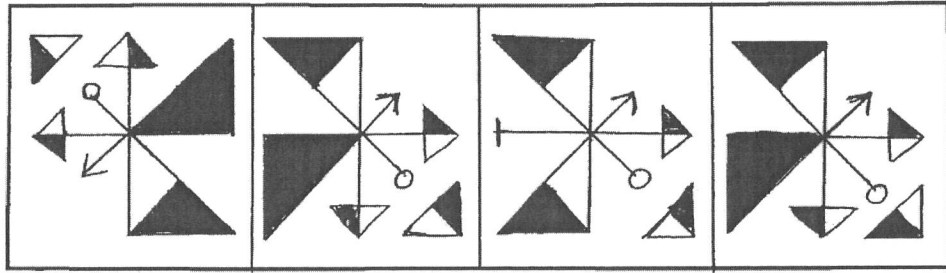
41. اور 42 کے لئے ہدایت:- ذیل میں دی ہوئی سوالیہ شکل کو پانی کی سطح پر کھڑی حالت میں رکھیں تو پانی میں اس کا عکس کس طرح بنے گا؟

سوالی شکل



41.

جوابی شکل



(1)


(2)

(3)


(4)

سوالی شکل

42.



جوابی شکل



(1)

(2)

(3)

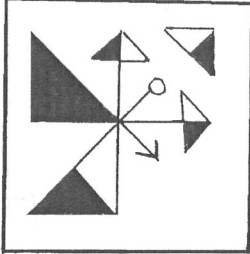
(4)

Space for Rough Work

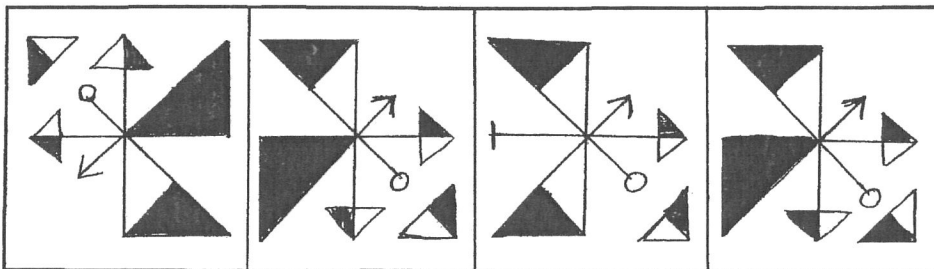
Alphabets : A B C D E F G H I J K L M N O P Q R S T U V W X Y Z

Q41. and Q42 Direction: If the question figure is held vertical above water surface, identify its water reflection and select the correct alternative.

41. Question figure



Answers figures




(1)

(2)


(3)

(4)

42. Question figure



Answers figures



(1)

(2)

(3)

(4)

Space for Rough Work

حروف : ABCDE FGHIJ KLMNO PQRST UVWXYZ

43. سورج طلوع ہوتے وقت اکبر چلنے کو نکلتا تب سورج اس کے بائیں جانب تھا۔ دو کلومیٹر چلنے کے بعد وہ دائیں جانب 90° قائمہ زاویہ بناتے ہوئے

مڑ گیا۔ کچھ فاصلہ طے کرنے کے بعد وہ دوبارہ دائیں جانب 90° قائمہ زاویہ بناتے ہوئے مڑ گیا۔ اب اس کے بائیں جانب کون سی سمت ہوگی ؟

(1) مشرق (2) مغرب (3) شمال (4) جنوب

44. نداء، فضا اور مریم ان کے عمروں کا مجموعہ 4 سال پہلے 28 سال تھا تو 4 سال بعد ان کی عمروں کا مجموعہ کتنا ہوگا ؟

(1) 32 (2) 40 (3) 36 (4) 52

45. احمد کرکٹ اور فٹبال کھیلتا ہے۔ اسد صرف ہاکی کھیلتا ہے۔ امین فٹبال اور کبڈی کھیلتا ہے۔ اور افسر فٹبال چھوڑ کر سبھی کھیل کھیلتا ہے تو کبڈی یہ کھیل کھیلنے

والے کون ہوں گے ؟

(1) اسد اور افسر (2) صرف امین (3) امین اور احمد (4) امین اور افسر

46. دیئے گئے علامتی سلسلہ میں سوالیہ نشان کی جگہ کون سا علامتی گروہ آئے گا ؟ پچھائیے۔

⊗ ⊕ △ ? ⊗ ⊕ ? ☆ ⊗ ⊕ △ ? ? ⊕ △ ☆

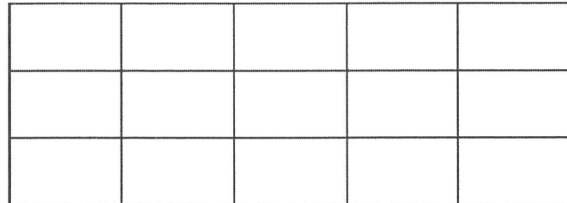
(1) ☆ △ ☆ ⊗ (2) ⊕ △ ☆ ⊗

(3) ☆ △ ⊕ ⊗ (4) ☆ ⊕ ☆ ⊗

47. ۱۹۷۶ء کو قائم کئے گئے مدرسے کا ”گولڈن جوبلی“ کب منایا جائے گا ؟

(1) ۱۹۷۶ء (2) ۲۰۰۶ء (3) ۲۰۲۶ء (4) ۲۰۲۵ء

48. دیئے گئے شکل میں ذواربعیۃ الاضلاع کی تعداد کتنی ہیں ؟



(1) 15 (2) 21 (3) 90 (4) 120

49. درج ذیل عددی سلسلہ میں غلط رکن پچھائیے۔

3, 11, 27, 57, 123, 251

(1) 123 (2) 57 (3) 27 (4) 11

Space for Rough Work

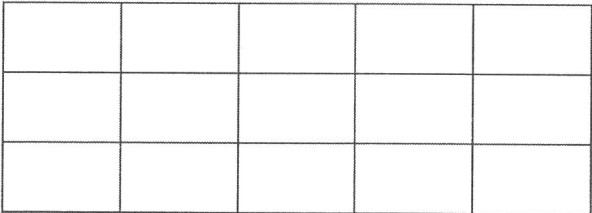
43. During the sunrise, Vishwas started walking that time the sun was to his left. He walked 2 km and turned 90° to his right. Again he walked for a while and turned 90° to his right, then which direction is to his left now ?
 (1) East (2) West (3) North (4) South
44. Total ages of Kavita, Savita and Salma four years before was 28 years, then what will be the total of their ages four years hence ?
 (1) 32 (2) 40 (3) 36 (4) 52
45. Suyash plays cricket and football, Rajendra plays only hockey, Shailesh plays football and Kabaddi and Deepak plays all sports except football, then who play Kabaddi ?
 (1) Deepak and Rajendra (2) Only Shailesh
 (3) Suyash and Shailesh (4) Deepak and Shailesh
46. Which group of symbols will occur at the place of question mark in the given series of symbols ?



- (1) (2)
- (3) (4)

47. 'Golden Jubilee' celebrations of the school will be on which day whose 'Foundation Day' is 1st June, 1976 ?
 (1) 1 June 2001 (2) 1 June 2036 (3) 1 June 2026 (4) 1 June 2025

48. How many squares are there in the given figure ?



- (1) 15 (2) 21 (3) 90 (4) 120

49. Find the odd term of the given number series.

- 3, 11, 27, 57, 123, 251
 (1) 123 (2) 57 (3) 27 (4) 11

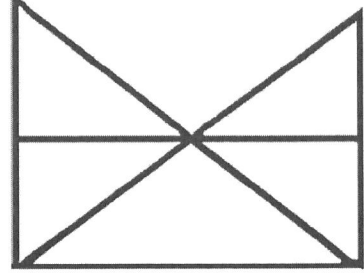
Space for Rough Work

حروف : ABCDE FGHIJ KLMNO PQRST UVWXYZ

50. 2015ء کو یوم آزادی اتوار کو تھی۔ 2016ء کو یوم تعلیم کون سے دن تھا؟

(1) سینچر (2) بدھ (3) اتوار (4) جمعہ

51. دیئے گئے شکل میں مثلث اور ذواربعیہ الاضلاع ان کی بالترتیب تعداد کیا ہوگی؟



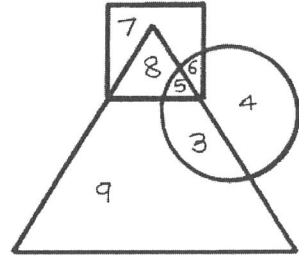
(1) 11 اور 7 (2) 9 اور 5 (3) 11 اور 5 (4) 11 اور 3

52. درج ذیل عددی سلسلہ میں سوالیہ نشان کے جگہ کون سا عدد ہوگا 121, 169, 225, 289, ?

(1) 334 (2) 400

(3) 246 (4) 361

53. درج شکل کے دائرہ میں میدان صاف کرنے والے طلباء، مثلث میں باغیچہ صاف کرنے والے طلباء اور مربع میں جماعت صاف کرنے والے طلباء دکھائے گئے ہیں شکل کا مشاہدہ کر کے پوچھے گئے سوالات کے جوابات متبادلات سے تلاش کیجئے۔



صرف میدان اور باغیچہ صاف کرنے والے طلباء کی تعداد کتنی ہے؟


(1) 3 (2) 7 (3) 6 (4) 5

Space for Rough Work

50. In 2015, Independence Day was on Sunday. On which day 'Literacy Day' will fall in the year 2016?

- (1) Saturday (2) Wednesday (3) Sunday (4) Friday

51. Each of the alternatives given below the figure indicate the number of triangles and quadrilaterals respectively. Observe the figure and choose the correct option.



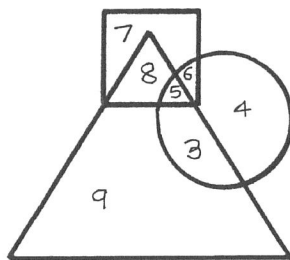
- (1) 11 and 7 (2) 9 and 5 (3) 11 and 5 (4) 11 and 3

52. Which number will replace the question mark in the given number series.

121, 169, 225, 289 ?

- (1) 334 (2) 400 (3) 246 (4) 361

53. In the given Venn diagram the students who clean the ground are shown in the circle, those who clean the garden are shown in the triangle and those who clean the classrooms are shown in the square. Observe the figure and answer the question by choosing the correct alternative.




How many students clean only ground and the garden ?

- (1) 3 (2) 7 (3) 6 (4) 5

Space for Rough Work

حروف : ABCDE FGHIJ KLMNO PQRST UVWXYZ

54. درج ذیل شکل میں مکعبی کندوں کی تعداد کتنی ہے ؟



20 (4)


16 (3)

19 (2)

7 (1)

55 اور 56 کے لئے ہدایت: سوال میں موجود سوالیہ شکلیں آئینہ میں کس طرح دکھائی دیں گے ؟ وہ متبادلات میں تلاش کیجئے۔

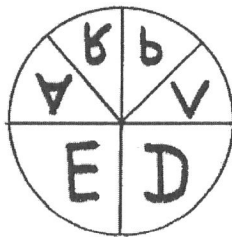
سوالی شکل 55.



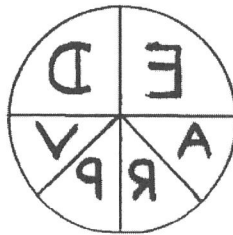
جوابی شکل



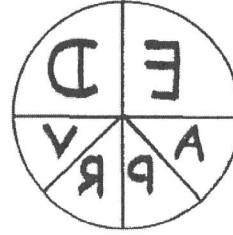
(1)



(2)




(3)



(4)

Space for Rough Work

54. How many cubicle boxes are there in the given figure ?



- (1) 7 (2) 19 (3) 16 (4) 20

Q55 and Q56 Direction: Find out the mirror image of each of the following question figure from the alternatives given.

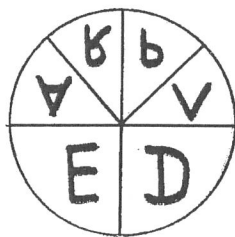
55. Question figure



Answers figures



(1)



(2)



(3)

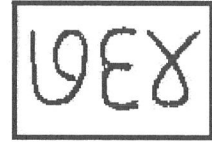


(4)

Space for Rough Work

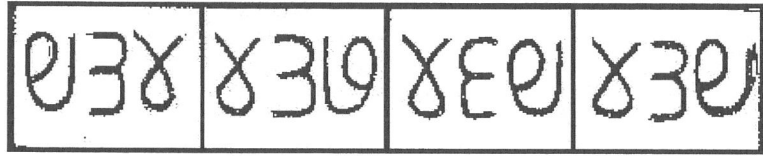
حروف : ABCDE FGHIJ KLMNO PQRST UVWXYZ

سوالی شکل



56.

جوابی شکل



سوال میں دیا گیا دین خاکہ متبادلات میں سے کن اجزاء کے لیے مناسب ہوگا؟ صحیح متبادل منتخب کیجئے۔

57.



(1) غذائی اجزاء کاربوہائیڈریٹ، گہ ہوں

(2) بھارت، مہاراشٹر، کرناٹک

(3) کھیل، کرکٹ بلہ بال

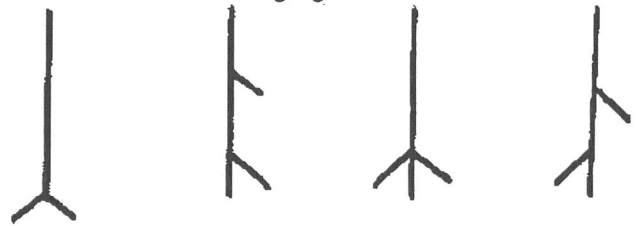
(4) تیلنگانہ، راجستھان، گوا

درج ذیل شکلوں میں مخصوص قسم کی ترتیب ہے۔ وہ ترتیب پہچان کر سوالیہ نشان کی جگہ کون سی شکل ہوگی؟ تلاش کیجئے۔

58.



جوابی شکل



(1)

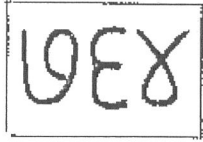
(2)

(3)

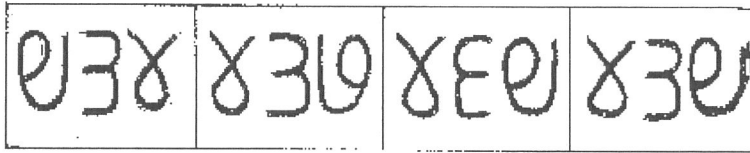
(4)

Space for Rough Work

56. Question figure



Answers figures



(1) (2) (3) (4)

57. Select the alternative which will match exactly to the Venn diagram given in the question.



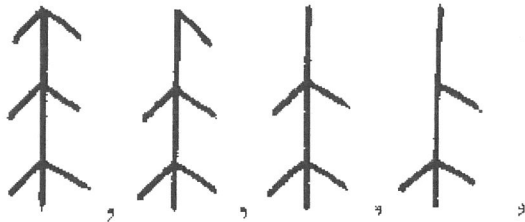
(1) Components of food, starchy food, Wheat

(2) India, Maharashtra, Karnataka


(3) Sport, Cricket, Batball

(4) Telangana, Rajasthan, Goa

58. In the given figures there is a specific order. Observe the order and find out the figure to replace the question mark.



Answers figures





(1) (2) (3) (4)

Space for Rough Work

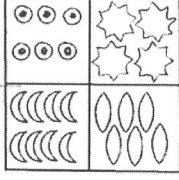
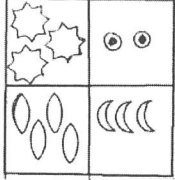

حروف : ABCDE FGHIJ KLMNO PQRST UVWXYZ

59 سے 63 کے لئے ہدایات :- درج ذیل سوالات میں پہلے اور دوسرے ارکان کا جو تعلق ہے ویسا ہی تعلق تیسرے اور چوتھے ارکان کا ہے۔ وہ تعلق تلاش کر کے سوالیہ نشان کی جگہ مناسب متبادل لکھئے۔

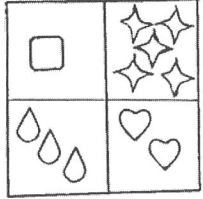

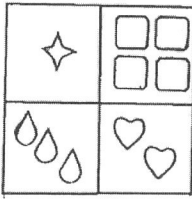
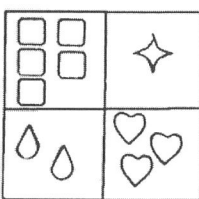
59.  : بندرگاہ ::  : ?




(1) تلحہ (2) لائٹ ہاؤس (3) ہوائی راستہ (4) کان

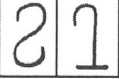



سوالی شکل

60.  :  ::  : ?

جوابی شکل

(1)  (2)  (3)  (4) 

61.  :  ::  : ?

(1)  (2)  (3)  (4) 

8 : 504 :: 6 : ? 62.

209 (4) 210 (3) 216 (2) 222 (1)

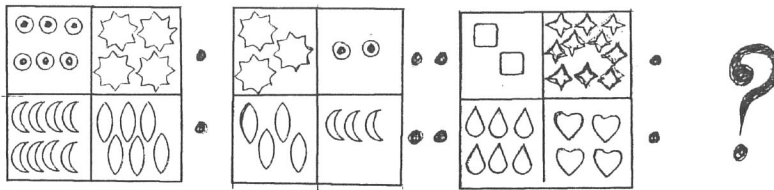
Space for Rough Work

Q59 to Q63 Direction: In the following question the first and second figure have a specific relationship between them. The same relationship exists between the third and the fourth figure. Find the correct figure from the alternatives to replace the question mark.


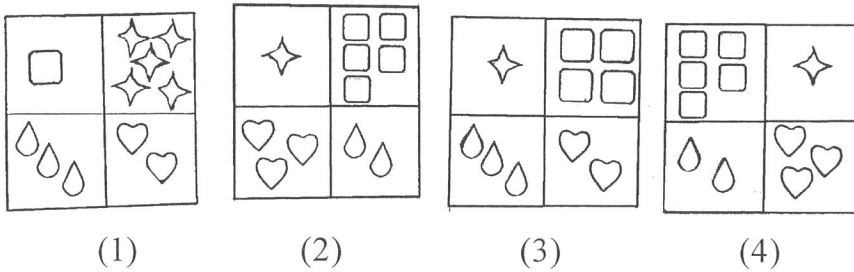


- (1) Fort (2) Light house (3) Airways (4) Mine

60. Question figure



Answers figures



62. 8 : 504 :: 6 : ?

- (1) 222 (2) 216 (3) 210 (4) 209

Space for Rough Work

حروف : ABCDE FGHIJ KLMNO PQRST UVWXYZ

241 : 4124 :: 372 : ? 63.

6281 (4) 6148 (3) 3214 (2) 6218 (1)

7, 8, 3, 2, 5, 6, 4, 2, 8, 7, 2, 3, 6, 8, 9, 4, 6 64.

درج بالا عددی سلسلہ میں جفت عدد کے فوراً بعد جفت عدد اور جفت عدد کے پہلے طاق عدد ایسا کتنی مرتبہ ہوا ہے ؟

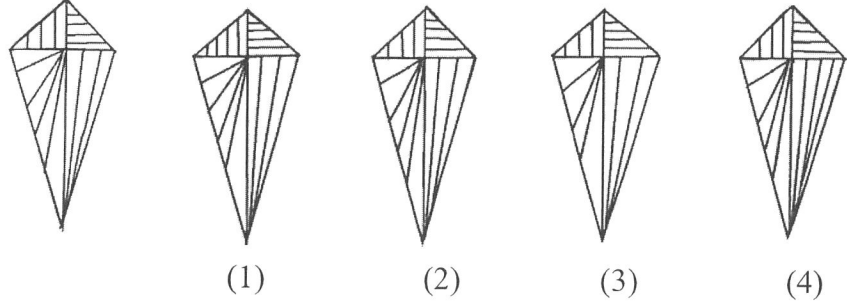
ایک (4) چار (3) تین (2) دو (1)

65 اور 66 کے لئے ہدایات :- درج ذیل سوالیہ شکل سے ہو بہو ملنے والی شکل متبادلات سے تلاش کیجئے۔

سوالی شکل

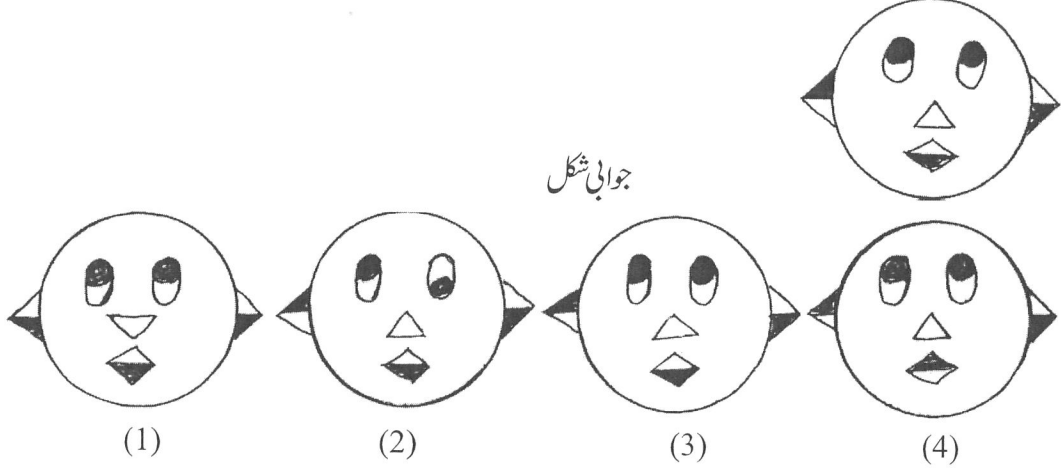
جوابی شکل

65.



سوالی شکل

66.



جوابی شکل

Space for Rough Work

63. 241 : 4124 :: 372 : ?

- (1) 6218 (2) 3214 (3) 6148 (4) 6281

64. In the given series, how many times even number is preceded by odd number and is immediately followed by an even number

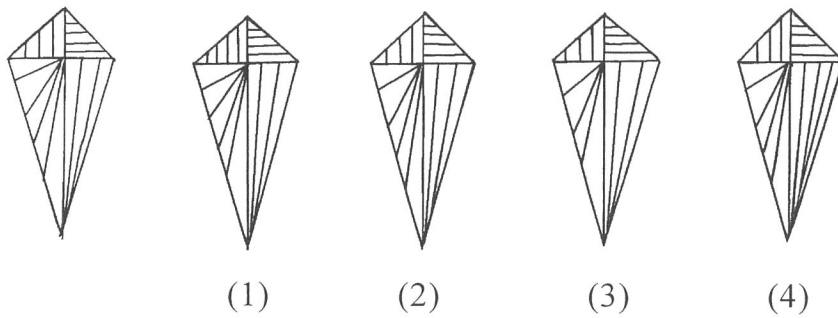
7, 8, 3, 2, 5, 6, 4, 2, 8, 7, 2, 3, 6, 8, 9, 4, 6

- (1) two (2) three (3) four (4) one


Q65 and Q66 Direction: Find out the figures which exactly matches with the question figure from the four alternative figures given below.

65 Question

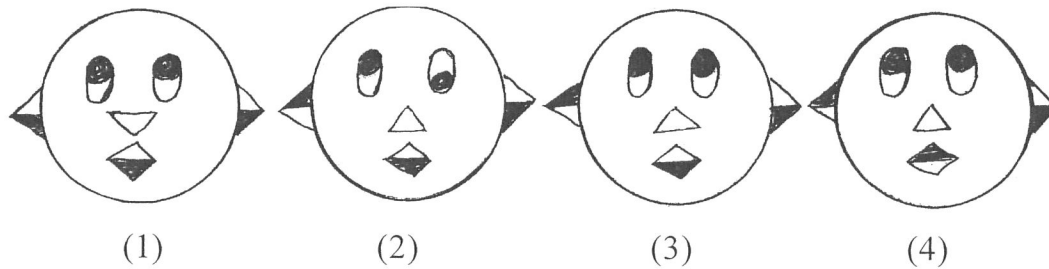
Answers



66. Question figure



Answers figures



Space for Rough Work

حروف : ABCDE FGHIJ KLMNO PQRST UVWXYZ

ABCDE

FGHIJ

KLMNO

PQRST

UVWXY

67.

درج بالا انگریزی حروف تہجی میں دائیں جانب سے پندرہ واں حرف کون سا ہے ؟

L (2)

O (1)

P (4)

K (3)

68. سوالیہ نشان کی جگہ آنے والے عدد کا متبادل تلاش کیجئے اور لکھئے ؟

5	3	16
6	4	?
7	2	45

10 (2)

25 (1)

20 (4)

61 (3)

69. ایک اشاراتی زبان میں 2 کو 5 کہا جائے، 3 کو 4 کہا جائے اور 7 کو 9 کہا جائے تو $3+2 \times 7 =$ کتنے ؟

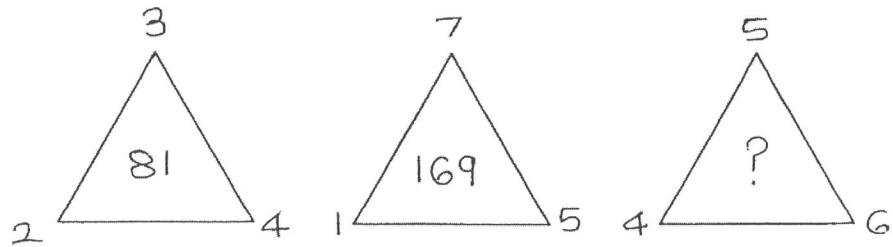
49 (2)

17 (1)

81 (4)

35 (3)

70. سوالیہ نشان کی جگہ آنے والے عدد کا متبادل تلاش کیجئے اور لکھئے ؟



196 (2)

225 (1)

235 (4)

256 (3)

Space for Rough Work

Alphabets : A B C D E F G H I J K L M N O P Q R S T U V W X Y Z

67. ABCDE FGHIJ KLMNO PQRST UVWXY

In the given alphabetical series which is the 15th letter from the right end ?

- (1) O (2) L
(3) K (4) P

68. Which number from the alternatives will replace the question mark in the box ?

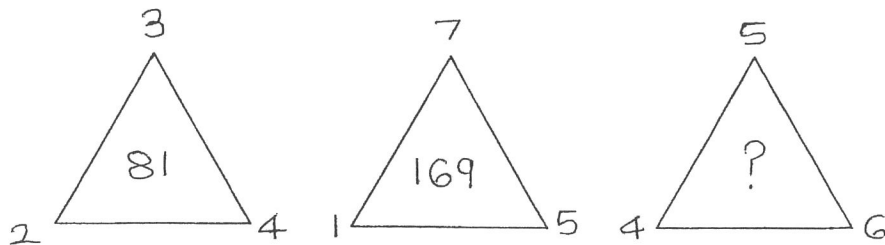
5	3	16
6	4	?
7	2	45

- (1) 25 (2) 10
(3) 61 (4) 20

69. In a code language 2 is called 5, 3 is called 4 and 7 is called 9 then $3 + 2 \times 7 =$ how much ?

- (1) 17 (2) 49
(3) 35 (4) 81

70. Choose the correct option to replace the (?) question mark.



- (1) 225 (2) 196
(3) 256 (4) 235

Space for Rough Work

حروف : ABCDE FGHIJ KLMNO PQRST UVWXYZ

71. ایک اشاراتی زبان میں ٹن (Tin) = 456، فن (Fin) = 542 اور نو (No) = 74 لکھا جائے تو (Font) کو اس زبان میں کس طرح لکھا جائے گا؟ نوٹ:- ہندسوں اور حرفوں کی ترتیب ایک جیسی ہوگی ایسا ضروری نہیں)

(1) 4526 (2) 6245

(3) 2657 (4) 2746

72 سے 73 کے لئے ہدایت:- حروف اور علامتوں کا جدول دیکھ سوالات کے جوابات دیجئے۔

س	ی	ک	ا	ش	ن	د
+	□	X	O	☆	=	△

72. 'شادی' یہ لفظ کون سے علامتوں کے ذریعہ ظاہر کیا جائیگا :

(1) ☆ O △ □ (2) ☆ □ O △

(3) O △ □ ☆ (4) △ ☆ □ O

73. کون سا لفظ اس علامت کے طور پر لکھا جائے گا = O ☆ = ؟

(1) مکان (2) شان

(3) نشان (4) شانا

74. اساتذہ نے آپ کے دوست کے مضمون کی خوب تعریف کی تو آپ کیا کریں گے ؟

(1) اساتذہ سے روٹھے رہیں گے۔ (2) دوست سے بات نہیں کریں گے۔

(3) دوست کو مبارکباد دیں گے۔ (4) میرا ہی مضمون اچھا ہے ایسا سبھی سے کہیں گے۔

75. "ذخیرہ آب" آلودہ نہ ہو اس کے لئے درج ذیل کونسا متبادل مناسب ہے ؟ تلاش کیجئے۔

(1) ذخیرہ آب پر غسل کرنا چاہیے۔ (2) ذخیرہ آب پر کپڑے دھونا نہیں چاہیے۔

(3) ذخیرہ آب کے اطراف گندگی کرنی چاہیے۔ (4) ذخیرہ آب میں مویشیوں کو نہلانا چاہیے۔

Space for Rough Work

Alphabets : A B C D E F G H I J K L M N O P Q R S T U V W X Y Z

71. In a code language TIN is written as 456 FIN is written as 542 and NO is written as 74 then how to write FONT is the same language ?

- (1) 4526 (2) 6245
(3) 2657 (4) 2746

(Note - Letters and numbers are not necessarily in order)

Q72 and Q73 Direction: Observe the table of letters and symbols and answer the question given below:

R	S	T	E	M	A	O	Y
☆	□	⊙	×	△	⊗	=	

72. Which symbol will be used to write the word 'MAYOR' ?

- (1) △ ⊗ || = ☆ (2) × △ ⊗ = ||
(3) △ ⊗ = ☆ || (4) ⊙ □ × = ☆

73. Which word will be formed by using the symbols '□ ⊙ × ⊗ △ × ☆'?

- (1) STEEMER (2) STEEMAR
(3) STEAMER (4) STAEMER

74. What will you do if your teacher appreciates the essay written by your friend ?

- (1) will not talk to the teacher (2) will not talk to your friend
(3) will congratulate your friend (4) will tell everyone that only your essay is good.

75. Which activity you think is correct to prevent the water reservoir from getting polluted ?

- (1) To bathe in the reservoir (2) Not to wash clothes
(3) Sit near the reservoir for toilet (4) To bathe the animals

Space for Rough Work

Space for Rough Work