

PRE UPPER PRIMARY SCHOLARSHIP EXAMINATION (Std. 5th), FEBRUARY 2019

Seat No.

--	--	--	--	--	--	--	--	--	--

0 5 0 2

Set

A

Paper No. II

Medium : English

Time : 3:30pm to 5:00pm

Pages : 24

Third Language and Intelligence Test

Total Marks : 150

Read the following instructions carefully before you answer the questions.

- (1) This question paper contains two sections. In Section I there are 1 to 25 questions of Third Language and in Section II there are 26 to 75 questions of Intelligence Test. All 75 questions are compulsory.
- (2) All questions carry 2 marks each.
- (3) Time limit to solve the question paper is 90 minutes.
- (4) Separate answer sheet is given to record the answers. Each question has been given four alternatives. Read them carefully. Select the correct answer and shade the correct answer in the answer sheet.
Example :- If the correct alternative for Q. No. 6 is 2, then record your answer as follows :
Question No. 6 ① ● ③ ④
- (5) Answer recorded in any other form will not be considered. Such answer will be credited with 'Zero' mark.
Example : ① ② ● ④
- (6) Use blue or black ball pen to darken the circle. Pencil is not allowed. Circles darkened by pencil will not be credited.
- (7) **One you have darkened the circle as correct alternative you cannot change it.**
- (8) **If more than one circles are darkened or overwriting is done, the answer will not be accepted.**
- (9) The rough work is to be done in the space given **under each page** or on the **last page** of the question paper.
- (10) If you do not know the answer to any question, do not spend much time on it and pass on to the next one. If the time permits you can come back to the question which you have left in the first instance and try them again.
- (11) If you find any question incomplete or with error, then do not ask anything to the Supervisor or Centre Incharge.
- (12) For any error/mistake/objection issues, school or parents should not send written application to Block Education Officer or Education Officer. These error/mistake/objection issues should be register online through respective school login only.
- (13) The error/mistake/objection issues should be register online within 10-days from the publication of Interim answer key on MSCE website.
- (14) Questions can be cancelled due to printing mistake of any other reason, on the basis of the suggestions given by the Committee of Experts.
- (15) Along with the question paper of the respective medium, the English version of question paper is also provided. In case of doubt please refer to the English version of the same question.

विभाग I

तृतीय भाषा

प्रश्ना 1 ते 3 साठी सूचना: खालील उतारा वाचून त्यावर आधारित विचारलेल्या प्रश्नांची उत्तरे पर्यायांतून निवडा.

रुखीचे आईवडील शेताची आणि घरची कामे करत असत. रुखी गुरांना चारापाणी देई. शेण काढी. वासरांवर तर तिचा खूप जीव होता. ती तिची भावंडंच होती जणू ! त्यांना ती येताजाता मायेनं गोंजारी.

एकदा काय झालं, रुखीचे आईबाबा शेजारच्या गावात बाजाराला गेले. घरात रुखी एकटीच होती. अंगणात एका मोठ्या झाडाच्या फांदीला झोपाळा बांधला होता. रुखी मजेत गाणी म्हणत, झोके घेत होती. इतक्यात तिला गोठ्यातून गाईच्या हंबरण्याचा आवाज ऐकू आला. म्हशीही रेकत होत्या, मोती जोरजोराने भुंकत होता. रुखीने गोठ्याकडे बघितले. गवताच्या गंजीतून भकाभका धूर निघत होता. गंजीने पेट घेतला होता.

तसे पाहिले, तर आपली रुखी फक्त बारा वर्षांचीच होती; पण किती हुशार आणि धीराची होती ती ! गंजी पेटल्याचे लक्षात येताच पटकन घरात जाऊन तिने मोठा सुरा आणला आणि गोठ्यात धावत गेली, गोठ्यात सगळीकडे धूर झाला होता. वासरे दावणीला हिसके देत होती. सर्वात आधी रुखीने लहान वासरांच्या दावणीचे दोर कापून टाकले. भराभर वासरे गोठ्याच्या बाहेर पळत सुटली. त्यांचा जीव वाचला.

1. उताऱ्यात कोणता ध्वनीदर्शक शब्द आलेला नाही ?

- | | |
|--------------|------------|
| (1) गोंजारणे | (2) भुंकणे |
| (3) हंबरणे | (4) रेकणे |

2. वासरे काय करत होती ?

- | | |
|---------------------|----------------------------|
| (1) चारा खात होती | (2) दावणीला हिसके देत होती |
| (3) उड्या मारत होती | (4) दूध पित होती |

Space for Rough Work

3. उताऱ्यातील वर्णनानुसार असत्य विधान कोणते ?

- (1) रुखी झोपाळ्यावर झोके घेत होती (2) रुखी गुरांची काळजी घेत असे
(3) रुखीचा वासरांवर खूप जीव होता (4) वासरांनी दावण्या तोडल्या

प्र. 4 ते 6 साठी सूचना: पुढील कविता काळजीपूर्वक वाचा व त्याखाली विचारलेल्या प्रश्नांची अचूक उत्तरे निवडा

पावसा रे, थांब कसा !

बंद दारे, बंद सारे

कोंडून मी राहू कसा ?

परसात जाऊ कसा ?

जास्वंदीचे लाल फूल

हात त्याला लावू कसा ?

अंगणात जाऊ कसा ?

कागदाच्या होड्या छान

पाण्यापाशी नेऊ कसा ?

शाळेंमध्ये जाऊ कसा ?

धडा माझा तोंडपाठ

दहापैकी दहा घेऊ कसा ?

मैदानात जाऊ कसा

चेंडूफळी कोपऱ्यात

मुकाट्याने पाहू कसा ?

बाबा आले ! थांब कसा !

ठोक देतील रागाने

रडशील ढसा ढसा !

Space for Rough Work

4. मुलगा फूलाला स्पर्श करु शकत नाही कारण
- (1) फूल खूप उंचावर आहे (2) फुलाभोवती काटे आहेत
(3) सतत पाऊस पडत आहे (4) सर्वत्र चिखल आहे
5. बाबा कोणाला रडवतील ?
- (1) मुलाला (2) फुलाला
(3) पावसाला (4) आईला
6. कवितेतील वर्णानुसार मुलाला काय करायचे नाही ?
- (1) कोंडून राहणे (2) पाण्यात होड्या सोडणे
(3) क्रिकेट खेळणे (4) पूर्ण गुण मिळवणे
7. 'संदेश' या शब्दाचा समानार्थी शब्द निवडा
- (1) निरोप (2) आज्ञा
(3) हुकूम (4) आदेश
8. विरुद्धार्थी शब्दांची योग्य जोडी निवडा.
- (1) कृतज्ञ × कृतघ्न (2) प्रकाश × उजेड
(3) मंजूळ × सुस्वर (4) सुगंध × सुवास
9. शब्दसमूह व त्याबद्दल एक शब्द यानुसार चुकीची जोडी निवडा.
- (1) ठरावीक काळाने प्रसिद्ध होणारे - नियतकालिक
(2) अस्वलांचा खेळ करणारा - दरवेशी
(3) बैलाच्या डोक्याला बांधायचे आभूषण - बार्शींग
(4) साठ वर्षांनी साजरा होणारा उत्सव - अमृत महोत्सव

Space for Rough Work

10. सिंहाची गर्जना तशी डासाची

- (1) किलबिल (2) कलकल
(3) भुणभुण (4) किण्किण

11. रिकाम्या जागी योग्य समूहदर्शक शब्द निवडा.

स्वातंत्र्यादिनी आकाशात लढावू विमानांचा..... प्रात्याक्षिक करत होता.

- (1) जथा (2) तांडा
(3) कळप (4) ताफा

12. चुकीची जोडी निवडा

- (1) ससा - बीळ (2) घुबड - ढोली
(3) कोंबडी - खुराडे (4) कोळी - पोळे

13. खालील वाक्यासाठी योग्य वाक्प्रचार निवडा.

एका पायाने अपंग असूनही पंकजला धावताना पाहून सर्वांना.....

- (1) खडे चारणे (2) नाक मुरडणे
(3) हात धरणे (4) नवल वाटणे

14. सोबतच्या आकृतीत लपलेल्या अर्थपूर्ण म्हणीतील शेवटून तिसरे अक्षर कोणते ?



- (1) ग (2) ट
(3) क्षा (4) ऊ

Space for Rough Work

15. वाक्यातील अधोरेखित शब्दाचा अर्थ पर्यायांतून निवडा.

गिव्हाईकांची प्रेमळ वाणी ऐकून वाणी आनंदी झाला.

- (1) एक किडा (2) उद्गार
(3) व्यापारी (4) दुकानदार

16. पुढीलपैकी कोणता जोडशब्द आहे ?

- (1) हवामान (2) भावजय
(3) शंखशिपले (4) नशीबवान

17. सा, न, दा, य, प या पाच अक्षरांपासून तयार होणाऱ्या अर्थपूर्ण शब्दातील अनुक्रमे दुसरे व पहिले अक्षर घेऊन तयार होणाऱ्या शब्दाचा अर्थ निवडा.

- (1) मलई (2) लहान
(3) ओंजळ (4) सर्प

18. पुढीलपैकी नाम नसलेला शब्द निवडा.

- (1) वर्ग (2) हुशार
(3) अभ्यास (4) प्रवाह

19. अपूर्ण वाक्य पूर्ण होण्यासाठी योग्य क्रियापद निवडा.

झाडाच्या वाळलेल्या फांद्याच इंधनासाठी.....

- (1) वापरा (2) लावा
(3) जगवा (4) रुजवा

20. दिलेल्या नामाचे विरुद्धलिंगी नाम ओळखा - नर्तक

- (1) नर्तन (2) नुर्तकी
(3) नर्तिका (4) नायिका

Space for Rough Work

21. खालील शब्दगटातील निश्चितपणे अनेकवचनी असणारा शब्द ओळखा.

- (1) चटई (2) डहाळी
(3) शेतकरी (4) टेकडी

22. पुढीलपैकी कोणत्या वाक्यात 'स्वल्पविराम' येईल ?

- (1) फिशटॅक मधील मासे काय खातात ?
(2) हापूस पायरी केशर अशी माझी काही नावे आहेत.
(3) लिंबाच्या रसाचा उपयोग करुन कागदावर लिहितात.
(4) अरे वा मग तर तू सगळ्याच वाहनातून फिरली असशील.

23. पुढीलपैकी अशुद्ध शब्द ओळखा.

- (1) दूरध्वनी (2) कोकीळ
(3) प्रदुषित (4) ठेवून

24. फुलापासुनी गंध घेऊया

कोकिळाकडून गाणे

झुळझुळणाच्या झऱ्यापासुनी

घेऊ नवे तराणे

वरील कवितेच्या ओळी कोणत्या कवीने लिहिल्या आहेत ?

- (1) ग.ह.पाटील (2) निलम माणगावे
(3) अ.ज्ञा.पुराणिक (4) वसंत बापट

25. भारतात साहित्यक्षेत्रसाठी दिला जाणारा सर्वोच्च पुरस्कार कोणता ?

- (1) खेलरत्न (2) पद्मश्री
(3) दादासाहेब फाळके (4) ज्ञानपीठ

Space for Rough Work

Section II

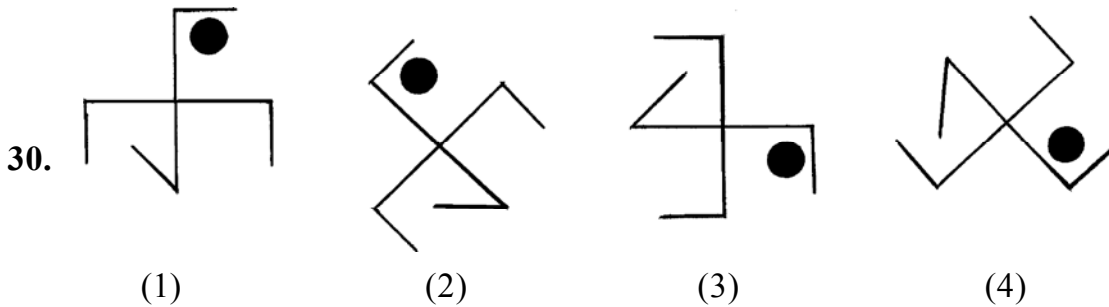
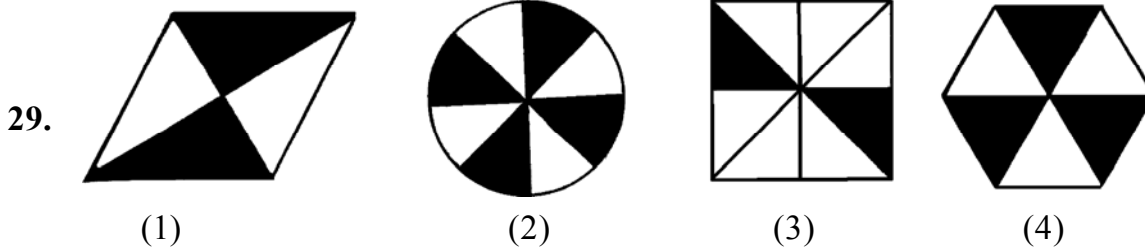
Intelligence Test

26. Make a meaningful word taking the second letter of the given words. 'PLAY, IVY, HENCE, SCORE, PEAR, FROG' From that meaning full word which letter will be at the 3rd place from right ?

- (1) E (2) V
(3) L (4) R

Q27 to Q31 Direction: Find the odd term

27. (1) Stomach (2) Food Pipe
(3) Small intestine (4) Lungs
28. (1) Rajasthan: Gangapur (2) Maharashtra: Patane
(3) Madhya Pradesh: Bhimbetka (4) Gujarat: Langhnaj



Space for Rough Work

Alphabets : A B C D E F G H I J K L M N O P Q R S T U V W X Y Z

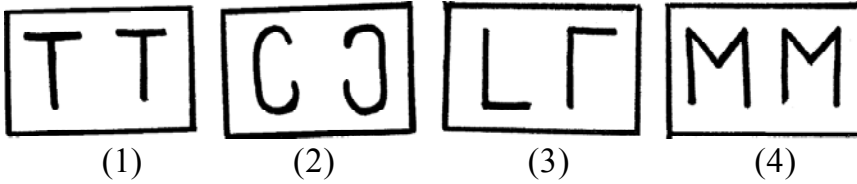
31. (1) 153 (2) 136
(3) 102 (4) 115
32. Find the number which will replace the question mark (?) in the given number series.
13, 17, 25, 32, 37, ?
(1) 47 (2) 42
(3) 45 (4) 46
33. 'Give me the strength lightly to bear my joys and sorrows.' In the statement how many times vowels have occurred ?
(1) 13 times (2) 8 times
(3) 7 times (4) 16 times
34. If calf is called cub, cub is called lamb, lamb is called kitten, kitten is called kid, kid is called puppy then what is the young ones of sheep called ?
(1) kid (2) cule
(3) kitten (4) pup
- Q35 to Q39 Direction: In each of the following question three words are given with some common characteristics so their group is formed. Select a word from the options given, which has the same common feature of the given group.**
35. Itching, Cough & Cold, Corn, _____
(1) cold fever (2) cholera
(3) measles (4) dysentery
36. Choir, heap, pile, _____
(1) humming (2) crowd
(3) march (4) mile

Space for Rough Work

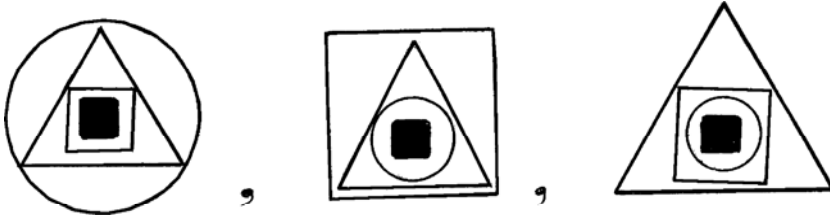
37. Question



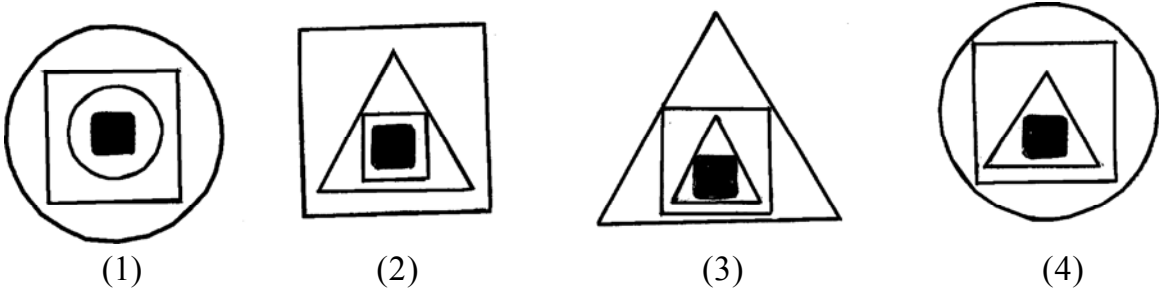
Answers



38. Question



Answers



39 $2\frac{1}{4}, 4\frac{2}{8}, 3\frac{1}{4}$ _____

(1) $5\frac{4}{16}$


(2) $5\frac{1}{2}$

(3) $6\frac{2}{4}$

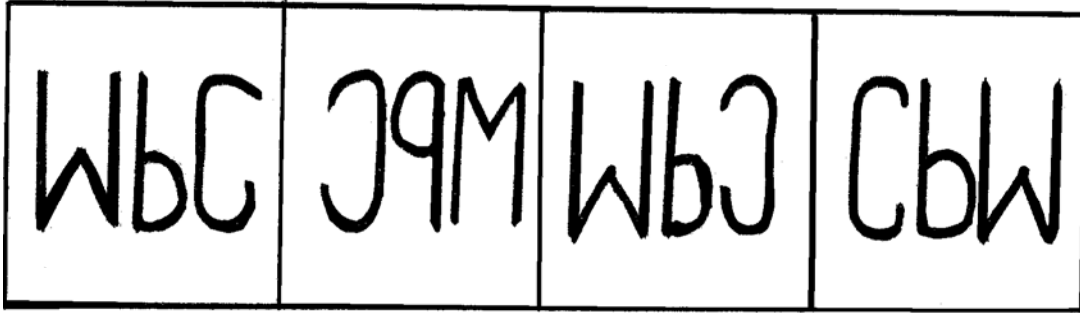
(4) $7\frac{1}{8}$

Space for Rough Work

42. Question



Answers



(1)

(2)

(3)

(4)

43. During the sunrise, Vishwas started walking that time the sun was to his left. He walked 2 km and turned 90° to his right. Again he walked for a while and turned 90° to his right, then which direction is to his left now ?

(1) East

(2) West

(3) North

(4) South

44. Total ages of Kavita, Savita and Salma four years before was 28 years, then what will be the total of their ages four years hence ?

(1) 32

(2) 40

(3) 36

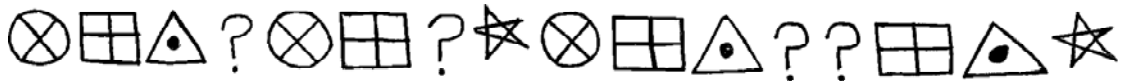
(4) 52

Space for Rough Work

Alphabets : A B C D E F G H I J K L M N O P Q R S T U V W X Y Z

- 45. Suyash plays cricket and football, Rajendra plays only hockey, Shailesh plays football and Kabaddi and Deepak plays all sports except football, then who play Kabbadi ?**
- (1) Deepak and Rajendra (2) Only Shailesh
 (3) Suyash and Shailesh (4) Deepak and Shailesh

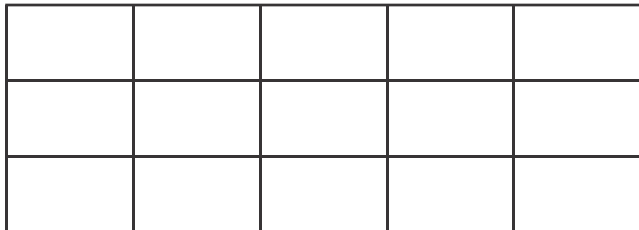
- 46. Which group of symbols will occur at the place of question mark in the given series of symbols ?**



- (1) (2)
 (3) (4)

- 47. 'Golden Jubilee' celebrations of the school will be on which day whose 'Foundation Day' is 1st June, 1976 ?**
- (1) 1 June 2001 (2) 1 June 2036
 (3) 1 June 2026 (4) 1 June 2025

- 48. How many squares are there is the given figure ?**



- (1) 15 (2) 21
 (3) 90 (4) 120

Space for Rough Work

49. Find the odd term of the given number series.

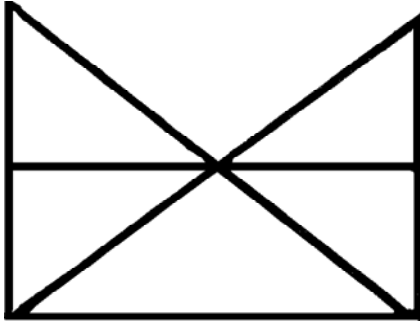
3, 11, 27, 57, 123, 251

- (1) 123 (2) 57
(3) 27 (4) 11

50. In 2015, Independence Day was on Sunday. On which day 'Literacy Day' will fall in the year 2016?

- (1) Saturday (2) Wednesday
(3) Sunday (4) Friday

51. Each of the alternatives given below the figure indicate the number of triangles and quadrilaterals respectively. Observe the figure and choose the correct option.



- (1) 11 and 7 (2) 9 and 5
(3) 11 and 5 (4) 11 and 3

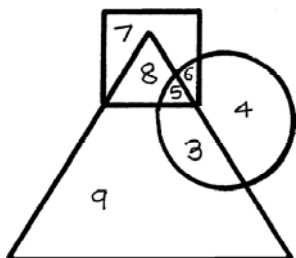
52. Which number will replace the question mark in the given number series.

121, 169, 225, 289 ?

- (1) 334 (2) 400
(3) 246 (4) 361

Space for Rough Work


53. In the given Venn diagram the students who clean the ground are shown in the circle, those who clean the garden are shown in the triangle and those who clean the classrooms are shown in the square. Observe the figure and answer the question by choosing the correct alternative.



How many students clean only ground and the garden ?

- (1) 3
- (2) 7
- (3) 6
- (4) 5

54. How many cubicle boxes are there in the given figure ?



- (1) 7
- (2) 19
- (3) 16
- (4) 20

Space for Rough Work

Q55 and Q56 Direction: Find out the mirror image of each of the following question figure from the alternatives given.

55. Question



Answers



(1)



(2)

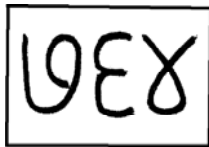


(3)

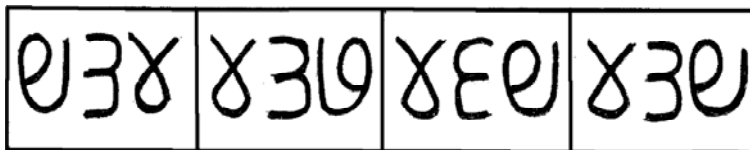


(4)

56. Question



Answers



(1)

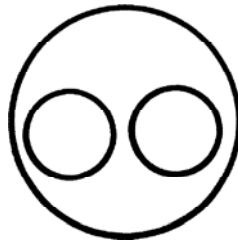
(2)

(3)

(4)

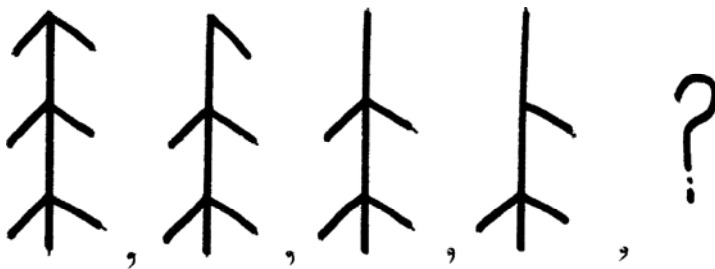
Space for Rough Work

57. Select the alternative which will match exactly to the Venn diagram given in the question.



- (1) Components of food, starchy food, Wheat
- (2) India, Maharashtra, Karnataka
- (3) Sport, Cricket, Batball
- (4) Telangana, Rajasthan, Goa

58. In the given figures there is a specific order. Observe the order and find out the figure to replace the question mark.



Answer

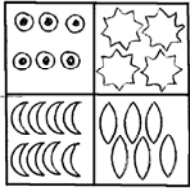


- (1)
- (2)
- (3)
- (4)

Space for Rough Work

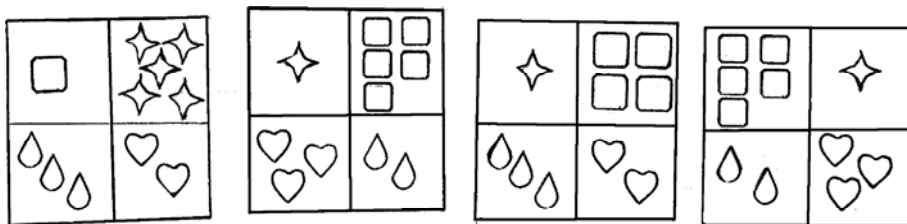
Q59 to Q63 Direction: In the following question the first and second figure have a specific relationship between them. The same relationship exists between the third and the fourth figure. Find the correct figure from the alternatives to replace the question mark.

59.  : Monkey :  : ?

- (1) Fort (2) Light house
(3) Airways (4) Mine

60.  :  ::  : ?

Answers



- (1) (2) (3) (4)

Space for Rough Work

61.

M	L
---	---

 ::

W	J
---	---

 ::

S	J
---	---

 :: ?

(1)

S	I
---	---

(2)

2	1
---	---

(3)

S	J
---	---

(4)

2	τ
---	---

62. 8 : 504 :: 6 : ?

(1) 222

(2) 216

(3) 210

(4) 209

63. 241 : 4124 :: 372 : ?

(1) 6218

(2) 3214

(3) 6148

(4) 6281

64. In the given series, how many times even number is preceded by odd number and is immediately followed by an even number

7, 8, 3, 2, 5, 6, 4, 2, 8, 7, 2, 3, 6, 8, 9, 4, 6

(1) two

(2) three

(3) four

(4) one

Space for Rough Work

Q65 and Q66 Direction: Find out the figures which exactly matches with the question figure from the four alternative figures given below.

65 Question

Answers



(1)

(2)

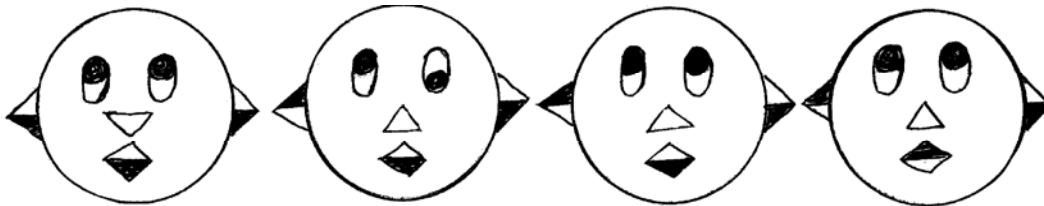
(3)

(4)

66. Question



Answers



(1)

(2)

(3)

(4)

Space for Rough Work

Alphabets : ABCDE FGHIJ KLMNO PQRST UVWXYZ

67. ABCDE FGHIJ KLMNO PQRST UVWXY

In the given alphabetical series which is the 15th letter from the right end ?

- (1) O
- (2) L
- (3) K
- (4) P

68. Which number from the alternatives will replace the question mark in the box ?

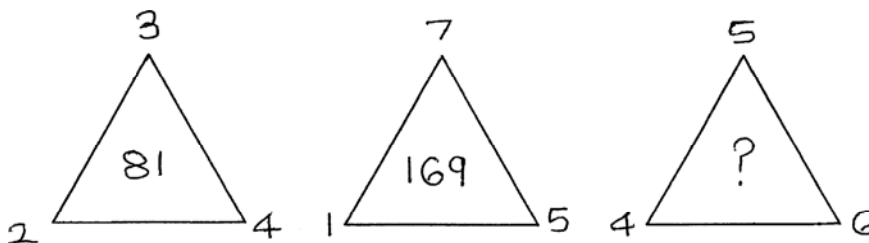
5	3	16
6	4	?
7	2	45

- (1) 25
- (2) 10
- (3) 61
- (4) 20

69. In a code language 2 is called 5, 3 is called 4 and 7 is called 9 then $3 + 2 \times 7 =$ how much ?

- (1) 17
- (2) 49
- (3) 35
- (4) 81

70. Choose the correct option to replace the (?) question mark.



- (1) 225
- (2) 196
- (3) 256
- (4) 235

Space for Rough Work

अक्षरमाला : A B C D E F G H I J K L M N O P Q R S T U V W X Y Z

71. In a code language TIN is written as 456 FIN is written as 542 and NO is written as 74 then how to write FONT is the same language ?

- (1) 4526 (2) 6245
(3) 2657 (4) 2746

(Note - Letters and numbers are not necessarily in order)

Q72 and Q73 Direction: Observe the table of letters and symbols and answer the question given below:

R	S	T	E	M	A	O	Y
✱	□	⊙	X	△	⊗	=	

72. Which symbol will be used to write the word 'MAYOR' ?

- (1) △ ⊗ || = ✱ (2) X △ ⊗ = ||
(3) △ ⊗ = ✱ || (4) ⊙ □ X = ✱

73. △ = □ X || Which word will be formed by using the symbols ' ' ?

- (1) STEEMER (2) STEEMAR
(3) STEAMER (4) STAEMER

Space for Rough Work

74. What will you do if your teacher appreciates the essay written by your friend ?

- (1) will not talk to the teacher (2) will not talk to your friend
(3) will congratulate your friend (4) will tell everyone that only your essay is good.

75. Which activity you think is correct to prevent the water reservoir from getting polluted ?

- (1) To bathe in the reservoir (2) Not to wash clothes
(3) Sit near the reservoir for toilet (4) To bathe the animals

Space for Rough Work

Space for Rough Work