

PRE SECONDARY SCHOLARSHIP EXAMINATION (Std. 8th), MAY 2021

Seat No.

0 5 2 2

Set

A

Paper No. II

Medium : English

Time : 1:30 to 3:00

Pages : 16

Third Language and Intelligence Test

Total Marks : 150

Read the following instructions carefully before you answer the questions.

- (1) This question paper contains **two** sections. In Section **I** there are **1** to **25** questions of Third Language and in Section **II** there are **26** to **75** questions of Intelligence Test. All **75** questions are compulsory.
- (2) All questions carry **2** marks each.
- (3) Time limit to solve the question paper is **90** minutes.
- (4) Separate answer sheet is given to record the answers. Each question has been given four alternatives. Read them carefully. Select and shade the correct answer in the answer sheet.
For Example :- If the correct alternative for Q. No. 6 is 2, then record your answer as follows :
Question No. 6 - ① ● ③ ④
- (5) Maximum 20% questions are having two correct alternatives. Candidate has to darken both the circles with correct answers. These questions will have the instruction '**Select two correct alternatives**'.
For Example :- If the correct alternative for Q. No. 8 is 2 & 3, then record your answer as follows : Question No. 8 - ① ● ● ④
- (6) Answer recorded in any other form will not be considered. Such answer will be credited with 'Zero' mark. ↙ ② ● ✖
- (7) Use blue or black ball pen to darken the circle. Circles darkened by pencil will not be credited.
- (8) Answer once recorded can not be changed.
- (9) The rough work is to be done in the space given under each page or on the last page of the question paper.
- (10) The exam has limited time, in case you are not able to solve a question, kindly solve the next question. In the end if time permits you can try to solve the unsolved questions.
- (11) If you find any question incomplete or with error, then do not ask anything to the Supervisor or Centre Incharge.
- (12) For any error / mistake / objection issues, school or parents should not send written application to Block Education Officer or Education Officer. These error / mistake / objection issues should be register online through respective school login only.
- (13) The error / mistake / objection issues should be register online within 10 - days from the publication of Interim answer key on MSCE website.
- (14) Suggestion & decision of expert committee will be applicable on printing or any other mistake in question paper.

SECTION - I

01. पुढीलपैकी शुद्ध शब्द ओळखा.
(1) तिकिट (2) किराना (3) प्रतीक (4) भुपाळी
02. ग्रंथ व ग्रंथकार यात अयोग्य जोडी कोणती?
(अचूक उत्तराचे दोन पर्याय निवडा.)
(1) गीताई - वेद व्यास (2) दासबोध - समर्थ रामदास
(3) गीतरामायण - सुधीर फडके (4) भावार्थदीपिका - संत ज्ञानेश्वर
03. 'नाद' हा शब्द कोणत्या अर्थाने वापरला जातो?
(अचूक उत्तराचे दोन पर्याय निवडा.)
(1) रव (2) छंद (3) नव (4) गंध

प्र. 04 ते 06 साठी सूचना -

पुढील उतारा काळजीपूर्वक वाचून त्याखाली विचारलेल्या प्रश्नांची अचूक उत्तरे निवडा.

माणसाच्या गरजा दोन प्रकारच्या असतात. एक आर्थिक व दुसरी सामाजिक. पैसा, सुख, सत्ता, प्रतिष्ठा वगैरे गोष्टी पहिल्या प्रकारात येतात. दुसऱ्या प्रकारात सचोटी, ज्ञान, न्याय, खेळीमेळीने वागणे, सहानुभूती, दुसऱ्याचे नीट समजून घेणे, निःपक्षपातीपणा, सेवा इत्यादी गोष्टी येतात. काही उत्कृष्ट वस्तू पैशाने विकत घेता येतात; पण मनाचे व हृदयाचे समाधान, सुख व शांती, सद्भाव व सदिच्छा या गोष्टी बाजारात मिळत नाहीत. धनाच्या राशी ओतल्या, तरी त्या लाभत नाहीत आणि याच गोष्टी सर्वांना हव्या असतात.

आपण आधी माणूस आहोत, म्हणूनच सौंदर्याचे प्रेम, मनाचा विकास वगैरे गोष्टी आपल्याला आकर्षित करत असतात; म्हणून आपण समाधान व मनाचे स्वातंत्र्य यालाच महत्त्व दिले पाहिजे.

04. 'सत्ता' ही कोणत्या प्रकारची गरज आहे?
(1) राजकीय (2) शैक्षणिक (3) आर्थिक (4) सामाजिक
05. 'आपपरभाव' या शब्दाचा कोणता विरुद्धार्थी शब्द वरील उताऱ्यात आला आहे?
(1) न्याय (2) निःपक्षपातीपणा (3) खेळीमेळी (4) सहानुभूती

SPACE FOR ROUGH WORK

06. उताऱ्यातील वर्णनानुसार असत्य विधान कोणते?
- (1) दुसऱ्याचे म्हणणे नीट समजून घ्यावे.
 - (2) पैशांनी सुख मिळवता येते.
 - (3) न्याय ही सामाजिक गरज आहे.
 - (4) काही वस्तू मोबदला देऊन मिळवता येतात.

प्र. 07 ते 09 साठी सूचना:

पुढील कविता काळजीपूर्वक वाचून त्याखाली विचारलेल्या प्रश्नांची अचूक उत्तरे निवडा.

वादळला हा जीवनसागर-अवसेची रात
पाण्यावर गडबडा लोळतो रुसलेला वात
भांबावुनि अभ्रांच्या गर्दित गुदमरल्या तारा
सूडाने तडतडा फाडतो उभे शीड वारा
पिंजुनिया आयाळ गर्जती लाटा भवताली
प्रचण्ड भिंगापरि फुटते जळ आदळुनी खाली
प्रवासास गलबते आपुली अशा काळराती
वावटळीतिल पिसांप्रमाणे हेलावत जाती
परंतु अंधारात चकाके बघा बंदरात
स्तंभावरचा प्रकाश हिरवा तेजस्वी शांत!
किरणांचा उघडून पसारा देवदूत कोणी
काळोखावर खोदित बसला तेजाची लेणी
उज्वल त्याची पहा प्रभावळ दूर मनोऱ्यात
अन् लावा हृदयात सख्यांनो, आशेची वात!

07. बदला कोण घेत आहे?

- (1) वारा (2) शीड (3) लाटा (4) सागर

08. 'प्रकाश' या शब्दाबद्दल अधिक माहिती देणारा कोणता शब्द कवितेत आला आहे?

- (1) प्रचंड (2) रुसलेला (3) हिरवा (4) गुदमरलेला

SPACE FOR ROUGH WORK

09. कवितेतील वर्णानुसार अयोग्य विधान कोणते?
 (1) ढगांत चांदण्या अस्वस्थ झाल्या आहेत.
 (2) सर्वत्र लाटा उसळल्या आहेत.
 (3) किरणांचा पसारा देवदूताने उघडला आहे.
 (4) मनात कोणतीही आशा धरू नये.
10. पुढीलपैकी कोणत्या वाक्यप्रचाराचा अर्थ चुकीचा आहे?
 (1) याचना करणे - विनंती करणे. (2) आस लागणे - दुःख होणे.
 (3) चरितार्थ चालवणे- उदरनिर्वाह करणे. (4) प्रण करणे - प्रतिज्ञा करणे.
11. 'आपले काम संपताच उपकारकर्त्याला विसरणे.' या अर्थाची म्हण पर्यायांतून निवडा.
 (1) गरज सरो, वैद्य मरो (2) गरजवंताला अक्कल नसते
 (3) हलवायाच्या घरावर तुळशीपत्र (4) आवळा देऊन कोहळा काढणे
12. पुढीलपैकी कोणता शब्द भिन्न अर्थाचा आहे?
 (1) शपथ (2) आण (3) आज्ञा (4) भाक
13. 'दुष्ट' या शब्दाचा योग्य विरुद्धार्थी शब्द पर्यायांतून निवडा.
 (1) सुष्ट (2) सुखी (3) आनंदी (4) खल
14. 'कोकणात जावून क्वचित प्रसंगी नदीचा महापुर पाहण्याचा योग येतो.' या वाक्यात कोणता अशुद्ध शब्द आला आहे? (अचूक उत्तराचे दोन पर्याय निवडा.)
 (1) जावून (2) महापुर (3) क्वचित (4) नदीचा
15. 'ज्ञानसमृद्धी' या शब्दामध्ये एकूण किती वर्ण आहेत?
 (1) तेरा (2) अकरा (3) दहा (4) बारा
16. 'आपण आलात आम्हाला आनंद झाला.' या वाक्यातील अधोरेखित शब्दाचा सर्वनाम प्रकार ओळखा.
 (1) दर्शक सर्वनाम (2) आत्मवाचक सर्वनाम
 (3) पुरुषवाचक सर्वनाम (4) संबंधी सर्वनाम

SPACE FOR ROUGH WORK

17. पुढीलपैकी आश्चर्यदर्शक केवलप्रयोगी अव्यय कोणते?
 (1) अहाहा (2) अबब (3) वाहवा (4) शाब्बास
18. पुढीलपैकी विशेषण असणारा पर्याय कोणता?
 (1) कोडकौतुक (2) नवाकोरा (3) डामडौल (4) पाऊसपाणी
19. पुढीलपैकी योग्य विरुद्धलिंगी जोडी असणारा पर्याय कोणता?
 (1) हंस - हंसा (2) भाट - भाटी (3) मालक - नोकर (4) विद्वान - विदुषी
20. वचनबदलानुसार विसंगत जोडी ओळखा.
 (1) आवड - आवडी (2) धार - धारे (3) नारा - नारे (4) निरोप - निरोप
21. पुढीलपैकी योग्य विरामचिन्ह वापरलेले वाक्य कोणते?
 (1) आलोक म्हणाला, “आई एवढ्याशा पैशानं तिचं कसं भागेल? तिला आणखी पैसे द्यायला हवेत.”
 (2) आलोक म्हणाला, “आई, एवढ्याशा पैशानं तिचं कसं भागेल, तिला आणखी पैसे द्यायला हवेत”.
 (3) आलोक म्हणाला, “आई, एवढ्याशा पैशानं तिचं कसं भागेल? तिला आणखी पैसे द्यायला हवेत”.
 (4) आलोक म्हणाला, “आई एवढ्याशा पैशानं तिचं कसं भागेल. तिला आणखी पैसे द्यायला हवेत!”
22. पुढीलपैकी रीती भूतकाळ असणारे क्रियापद कोणते?
 (1) धावत असतात (2) धावले होते (3) धावत होते (4) धावत असे
23. ‘कृष्णाजी केशव दामले’ यांना कोणत्या टोपणनावाने ओळखले जाते?
 (1) केशवकुमार (2) केशवसुत (3) अनिल (4) गोविंदाग्रज
24. ‘शत्रुत्व नाहीसे करून झालेला सलोखा’ या अर्थाचा योग्य शब्द कोणता?
 (1) योजना (2) संकल्प (3) तह (4) बेत
25. पुढीलपैकी जोडशब्द नसणारा पर्याय ओळखा.
 (1) तंटाबखेडा (2) साजशृंगार (3) रोमहर्षक (4) धामधूम

SPACE FOR ROUGH WORK

A B C D E | F G H I J | K L M N O | P Q R S T | U V W X Y

SECTION - II

INTELLIGENCE TEST

Q. 26 and 27 :

Use the given number series.

2 3 5 7 2 4 6 7 3 2 8 2 9 4 3 5 7 1 2 6

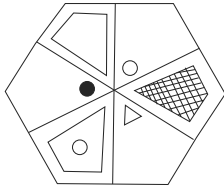
26. In the given number series how many times the sum of two adjacent numbers gives a prime number?
(1) Six (2) Seven (3) Five (4) Eight
27. Which number occurs maximum times in the given series?
(1) 7 (2) 3 (3) 4 (4) 2
28. Form a meaningful word from the letters 'R E O M'. What is the position of the letters in this word which is used to indicate the word 'Options'?
(1) fourth, second (2) second, third (3) first, fourth (4) first, third
29. In the given alphabet series which letter is seventh to the left of the letter which is eighth from the right side of the series?
(1) K (2) O (3) M (4) A
30. In the given alphabet series which of the following pair of alphabet is at the same distance from the alphabet which is at the Ninth position from the left of the series? (Select two correct alternatives.)
(1) FL (2) BN (3) BL (4) OC

Q. 31 to 35 Choose the odd term

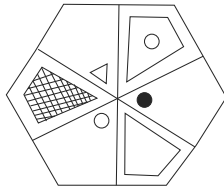
31. (1) Divine (2) Deity (3) God (4) Ghost
32. (1) Loose motion (2) Malaria (3) Cholera (4) Dysentery

SPACE FOR ROUGH WORK

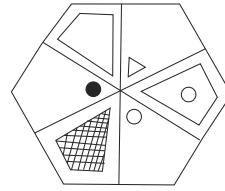
33.



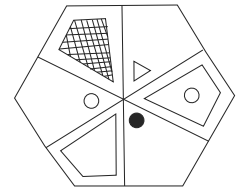
(1)



(2)



(3)



(4)

34.

(1) 210

(2) 336

(3) 150

(4) 504

35.

(1) CH

(2) EJ

(3) LB

(4) FD

Q. 36 to 40 Direction :-

In each of the following questions relation between 3rd and 4th term is similar to that as between 1st and 2nd term. Find the term to replace the question mark from the given alternatives.

36.

Cause : Reason :: Perfect : ?

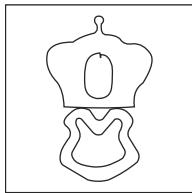
(1) Pure

(2) Imperfect

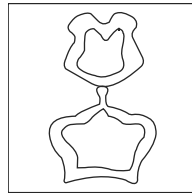
(3) Idle

(4) Ideal


37.



•
•

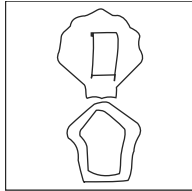


• •
• •

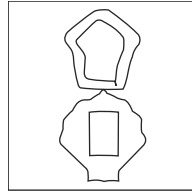


•

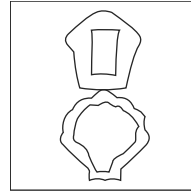
?



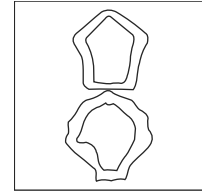
(1)



(2)



(3)



(4)

38.

69 : 123 :: 48 : ? (Select two correct alternatives)

(1) 112

(2) 102

(3) 80

(4) 84

SPACE FOR ROUGH WORK

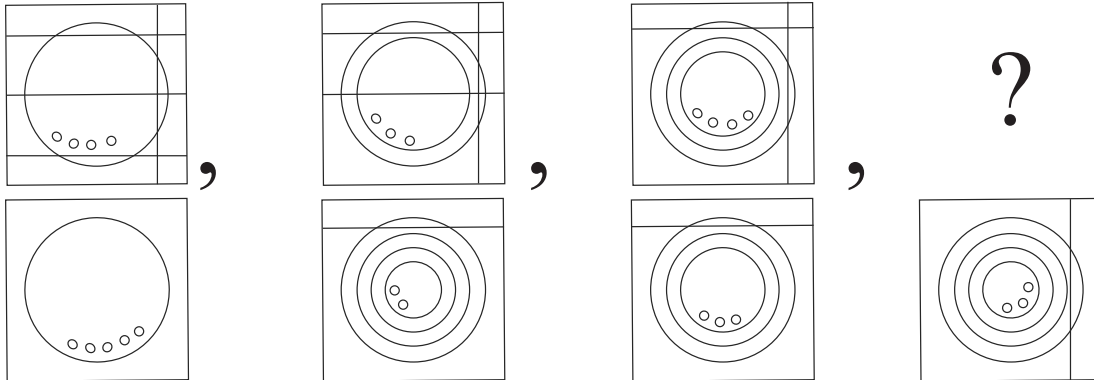
A	B	C	D	E	F	G	H	I	J	K	L	M	N	O	P	Q	R	S	T	U	V	W	X	Y
---	---	---	---	---	---	---	---	---	---	---	---	---	---	---	---	---	---	---	---	---	---	---	---	---

39. $394 : 54 :: 875 : ?$
 (1) 55 (2) 94 (3) 140 (4) 146
40. $ADJ : BFM :: CIO : ?$
 (1) DKR (2) ELR (3) DKQ (4) DJP

Q. 41 to 45 Direction :-

In the following series, determine the rule underlying the series and find out the term to replace the question mark.

41. 812, 715, 626, 543, 464, 391, ?
 (1) 316 (2) 320 (3) 318 (4) 309

42. 

(1) (2) (3) (4)

43. $\ominus \triangle \equiv \triangle \equiv \oplus \equiv \oplus \triangle \oplus \triangle \square \triangle \square \ominus \square ? ?$
 (1) $\oplus \triangle$ (2) $\ominus \triangle$ (3) $\ominus \square$ (4) $\triangle \oplus$

44. BC, EG, HK, KO, NS, ?
 (1) NR (2) QK (3) EG (4) QW

45. YXW, XVT, WSP, VOK, ?
 (1) UJE (2) UJF (3) YKE (4) XKE

SPACE FOR ROUGH WORK



A	B	C	D	E	F	G	H	I	J	K	L	M	N	O	P	Q	R	S	T	U	V	W	X	Y
---	---	---	---	---	---	---	---	---	---	---	---	---	---	---	---	---	---	---	---	---	---	---	---	---

46. Select the wrong term in the given series :

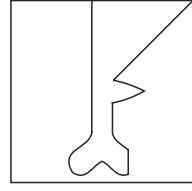
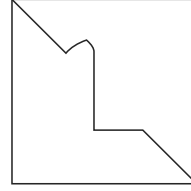

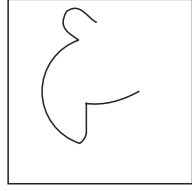

13, 16, 22, 26, 38, 62, 76, 102

- (1) 38 (2) 62 (3) 76 (4) 16

47. Find the hidden part of the question figure from the given alternatives.

Question Fig.

Answer Fig.



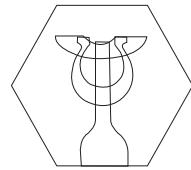
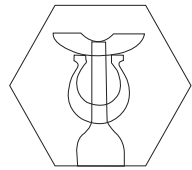



- (1) (2) (3) (4)

48. Choose the figure from the given alternatives that exactly matches the question figure.

Question Fig.

Answer Fig.

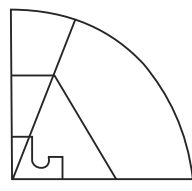
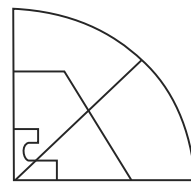
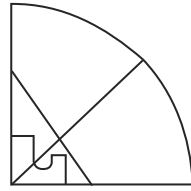
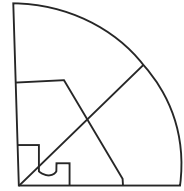
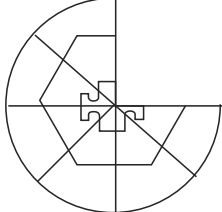


- (1) (2) (3) (4)

49. Choose the correct alternative to complete the question figure :

Question Fig.

Answer Fig.



- (1) (2) (3) (4)

SPACE FOR ROUGH WORK

A	B	C	D	E	F	G	H	I	J	K	L	M	N	O	P	Q	R	S	T	U	V	W	X	Y
---	---	---	---	---	---	---	---	---	---	---	---	---	---	---	---	---	---	---	---	---	---	---	---	---

50. Observe the numbers in the grid and choose the correct alternative to replace the question mark.

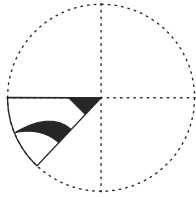
7	6	8
28	4	?
12	2	15

- (1) 34 (2) 60 (3) 17 (4) 40

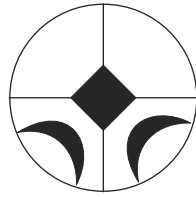
Q. 51 and 52 Direction :-

A square sheet of paper is folded and cut as shown in the question figure. How will the figure look like when the paper is unfolded. Choose the correct alternative.

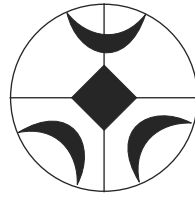
51. Question Fig.



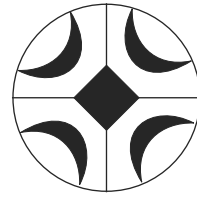
Answer Fig.




(1)



(2)

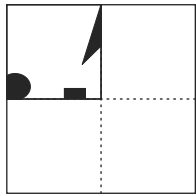


(3)

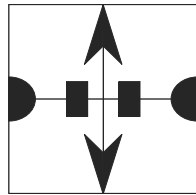


(4)

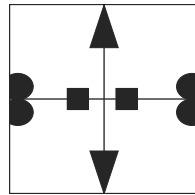
52. Question Fig.



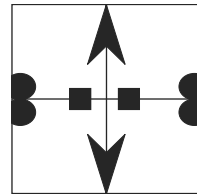
Answer Fig.



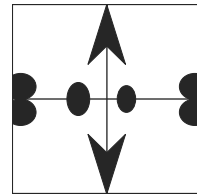
(1)



(2)



(3)

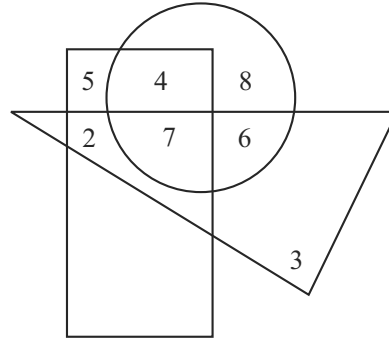


(4)

SPACE FOR ROUGH WORK

Q. 53 and 54 Direction :-

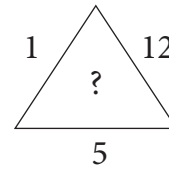
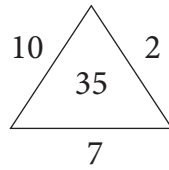
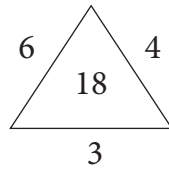
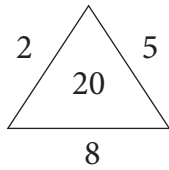
In the given Venn diagram numbers in circle represent farmers, numbers in triangle represent teachers and numbers in rectangle represent doctors.



53. How many teachers are farmers also?
 (1) 6 (2) 13 (3) 24 (4) 17
54. By how much is the number of doctors who are doing only farming is more or less than the number of teachers who are only doctors?
 (1) more by four (2) less by four
 (3) more by two (4) less by two
55. If Maharashtra Day occurs on Wednesday then which of the following day will occur five times in the month of September in the same year? (Select two correct alternatives)
 (1) Sunday (2) Saturday (3) Tuesday (4) Monday
56. Abhishek is watching the sunset, he turns three times at right angle to his right, then which direction is indicated by his left hand?
 (1) South (2) East (3) West (4) North
57. Akshay is standing at the 19th position which is middle of the row. If last eight students leave the row then what is the position of Prasanna from back of the row who is at the ninth position from the front of the row?
 (1) 20 (2) 19 (3) 29 (4) 21

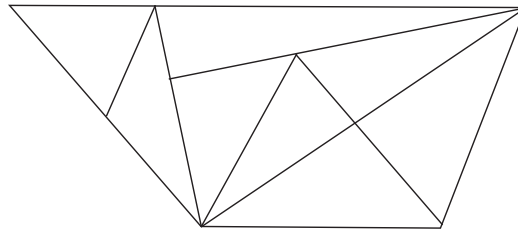
SPACE FOR ROUGH WORK

58. Find the pattern of the numbers in the given arrangement and choose the correct alternative to replace the question mark.




- (1) 15 (2) 30 (3) 24 (4) 27

59. Find the total number of triangles in the given figure?



- (1) 15 (2) 16 (3) 17 (4) 14

60. What is the total number of cubes in the given question figure.



- (1) 35 (2) 29 (3) 28 (4) 30

61. The ratio of ages of A, B, C is 5:7:12. If age of 'B' is more by two and a half years than age of 'A', then what was the age of 'C' two years before?

- (1) 13 years (2) 10 years (3) 12 years (4) 15 years

SPACE FOR ROUGH WORK




A	B	C	D	E	F	G	H	I	J	K	L	M	N	O	P	Q	R	S	T	U	V	W	X	Y
---	---	---	---	---	---	---	---	---	---	---	---	---	---	---	---	---	---	---	---	---	---	---	---	---


62. In the clock, at what time the angle between hour hand and minute hand measures 75° ? (Select two correct alternatives)
- (1) 30 minutes past nine
 - (2) 30 minutes past two
 - (3) 30 minutes past three
 - (4) 30 minutes past eight

63. Choose the mirror image of the question figure from the given alternatives.


Question Fig.




Answer Fig.



(1)



(2)



(3)

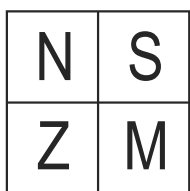


(4)

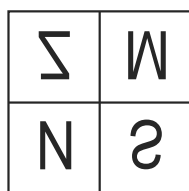
Q. 64 and 65 Direction :-

Choose the water image of the question figure from the given alternatives.

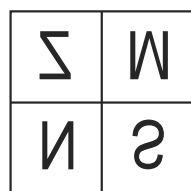
64. Question Fig.



Answer Fig.



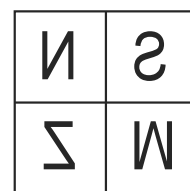
(1)



(2)

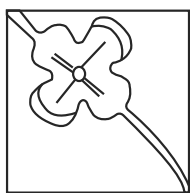


(3)

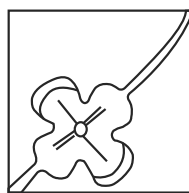


(4)

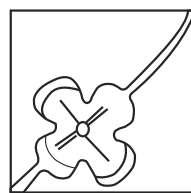
65. Question Fig.



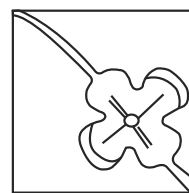
Answer Fig.



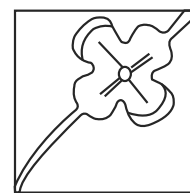
(1)



(2)



(3)




(4)

SPACE FOR ROUGH WORK

A	B	C	D	E	F	G	H	I	J	K	L	M	N	O	P	Q	R	S	T	U	V	W	X	Y
---	---	---	---	---	---	---	---	---	---	---	---	---	---	---	---	---	---	---	---	---	---	---	---	---

Q. 66 to 68 Direction :-

Observe the following pyramid of numbers and the sequence of terms given in the questions that follow. Choose the correct term from the given alternatives to replace the question mark.



66. 11, 17, 31 : 37, 22, 32 :: 28, 12, 31 : ?
 (1) 21, 34, 38 (2) 26, 20, 38 (3) 26, 20, 15 (4) 26, 34, 15
67. 23, 33, 17 : 12, 24, 27 :: 32, 25, 14 : ? (Choose two correct alternatives)
 (1) 26, 20, 38 (2) 31, 22, 39 (3) 34, 12, 27 (4) 21, 34, 15
68. 18, 32, 14, 17, 37, ?, 31, 12
 (1) 24 (2) 27 (3) 39 (4) 38

Q. 69 to 71 Direction :-

Identify the rhythmic arrangement of terms given below and find the correct term to replace the question mark.

69. a b c d e b b c d e a c ? d e a ? d d e a b ? e e
 (1) c b d (2) b b c (3) c c d (4) c b c

SPACE FOR ROUGH WORK



A	B	C	D	E	F	G	H	I	J	K	L	M	N	O	P	Q	R	S	T	U	V	W	X	Y
---	---	---	---	---	---	---	---	---	---	---	---	---	---	---	---	---	---	---	---	---	---	---	---	---

70. $\bigcirc + \triangle \times \square \times \square \bigcirc + \triangle ? \triangle \times ? \bigcirc \square \bigcirc + ? \times \triangle \times \square \bigcirc +$
 (1) $+\square\triangle$ (2) $+\triangle\triangle$ (3) $\times\square\triangle$ (4) $+\square\bigcirc$
71. 0 1 2 1 2 3 2 3 4 3 4 5 4 ? ? ? ? 7 6 7 8 7 8 9
 (1) 5 6 4 5 (2) 4 5 6 4 (3) 5 6 5 6 (4) 5 6 7 5

Q. 72 to 74 Direction :-

In a certain code language MAT is written as '427', CAN is written as '584' and NOT is written as '597'. The relation of letters and numbers may not be one to one.

72. Which number represents alphabet 'C'?
 (1) 4 (2) 5 (3) 8 (4) 2
73. What is the code for 'EAT'?
 (1) 547 (2) 247 (3) 289 (4) 147
74. $M + C - T = ?$
 (1) 5 (2) 3 (3) 2 (4) 8
75. Observe the numbers given in the grid and choose the correct alternative to replace the question mark. (Select two correct alternatives)

73	?	61
59	43	71
47	67	53

- (1) 37 (2) 41 (3) 79 (4) 77

SPACE FOR ROUGH WORK



SPACE FOR ROUGH WORK